

VERIFICA SULLE FRAZIONI

A. Collega ogni elemento alla sua spiegazione.

Numeratore

Significa dividere
in parti uguali

Denominatore

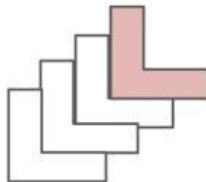
Indica quante parti
uguali dell'intero
ho considerato

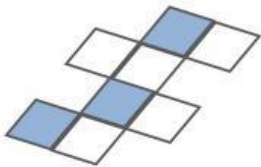
Linea di frazione

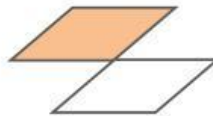
Indica in quante
parti uguali ho
diviso l'intero

B. Osserva la figura e scrivi la frazione in numeri e in parole.










C. Leggi la frazione, rappresentala nella figura, scrivila in parole.



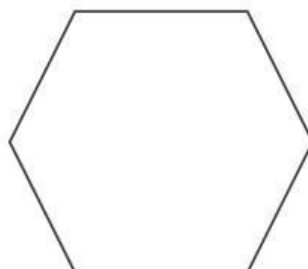
$\frac{5}{8}$



$\frac{3}{7}$



$\frac{4}{5}$



$\frac{7}{12}$
