

AYO LATIHAN BIAR LANCAR

Kelas III (Tiga)

SD Negeri Mitra

Materi: Perkalian

Aktivitas: latihan perkalian

Objectives

- menghitung perkalian bilangan cacah sampai 100 menggunakan simbol matematika




Nama Kelompok	Peran	Nomor Absen
	Ketua	
	Anggota	
	Anggota	
	Anggota	

Paraf

Nilai




Perkalian buah

Tulis seperti contoh!







~~$3 \times 2 = 6$~~

~~$2 + 2 + 2 = 6$~~







~~X~~ ~~X~~

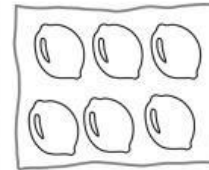
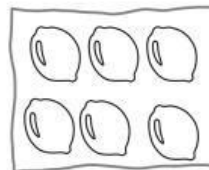
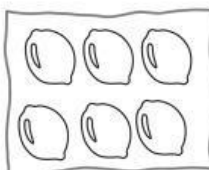
~~X~~ ~~X~~



~~X~~ ~~X~~







~~X~~ ~~X~~




~~X~~ ~~X~~

~~X~~ ~~X~~





~~X~~ ~~X~~

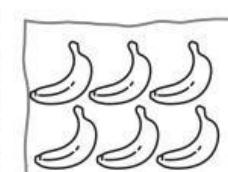
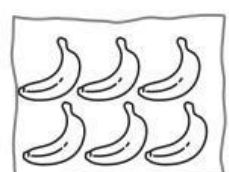
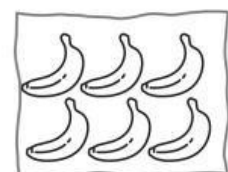
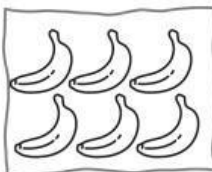
~~X~~ ~~X~~



~~X~~ ~~X~~



~~X~~ ~~X~~

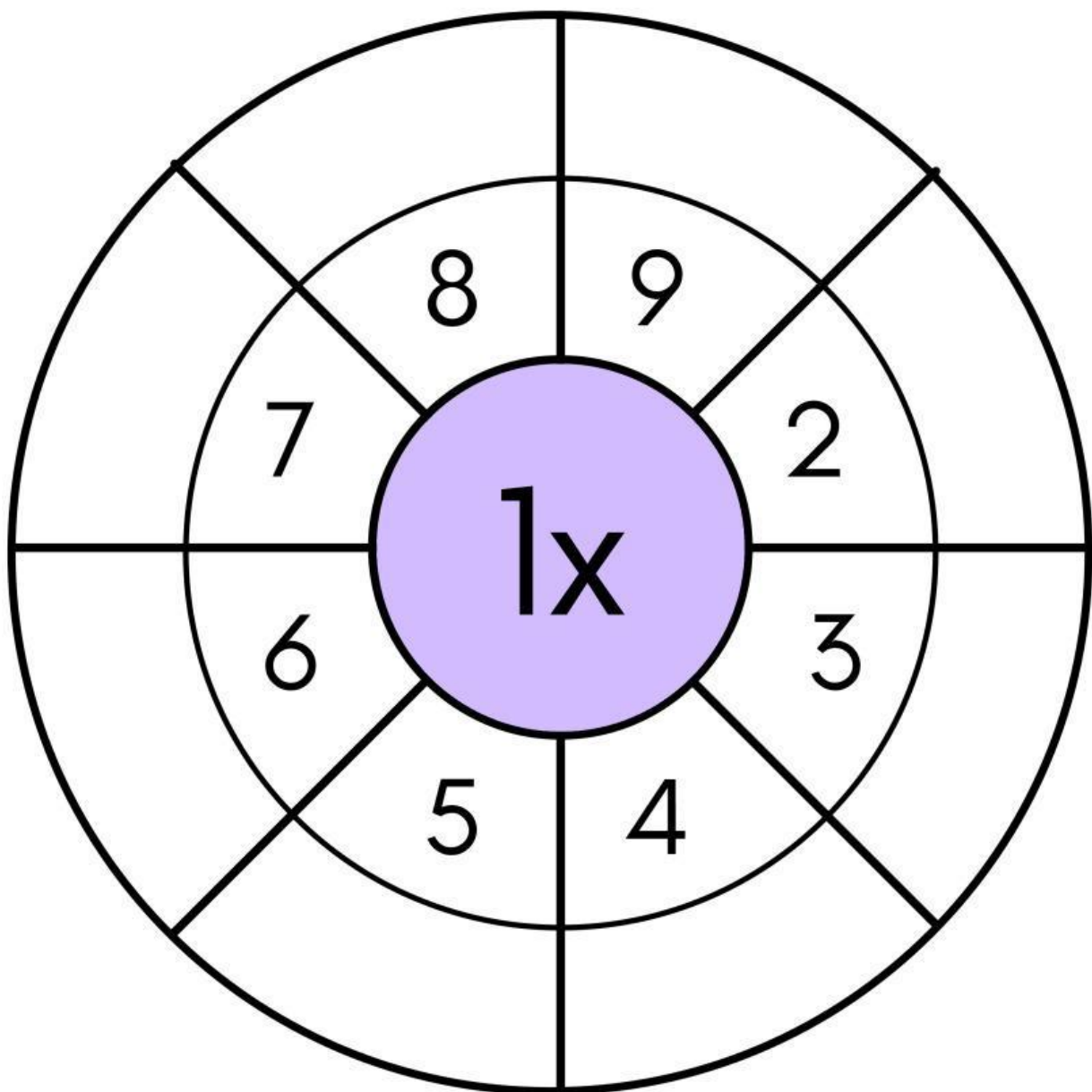


~~X~~ ~~X~~

~~X~~ ~~X~~

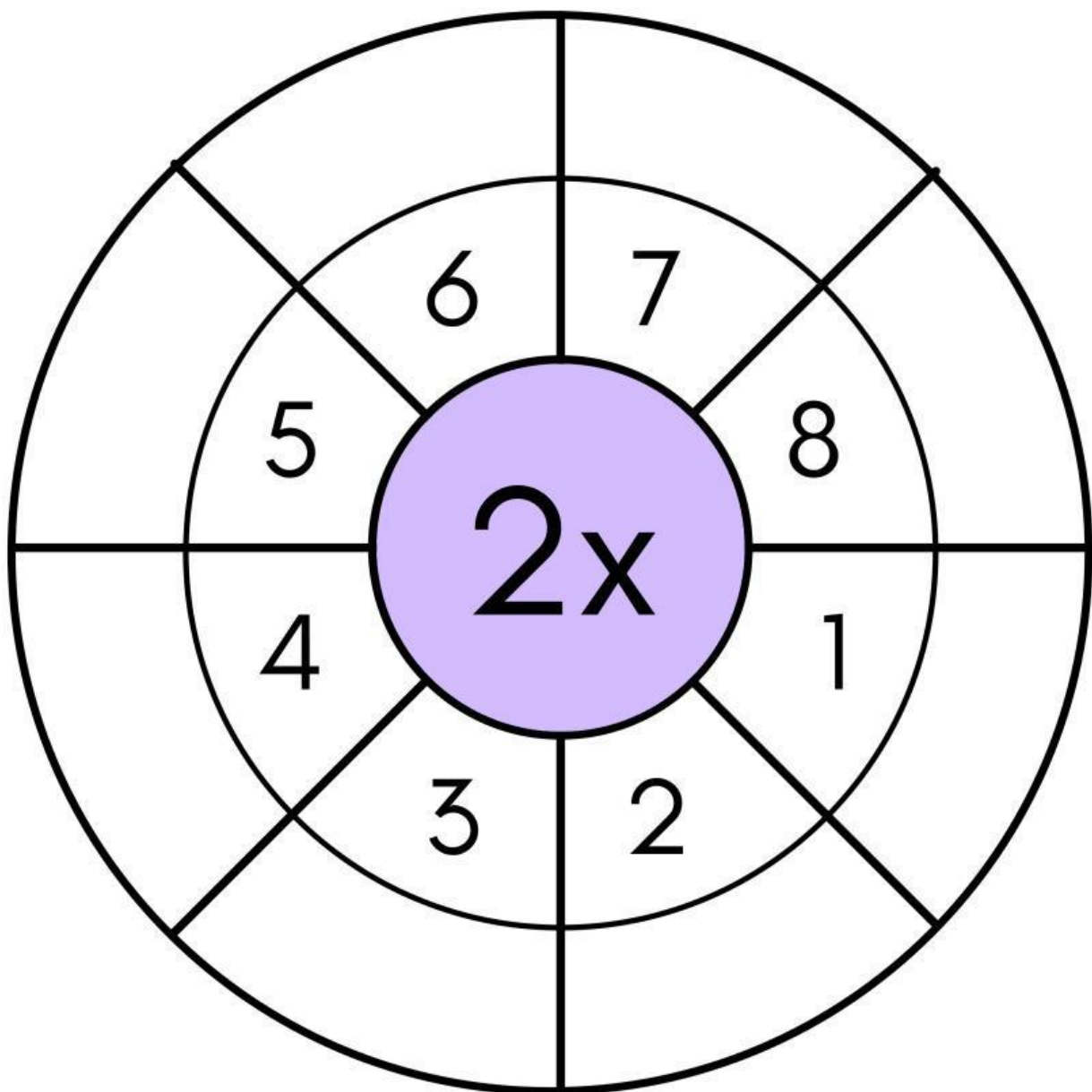
RODA PERKALIAN

Lengkapi roda-roda perkalian ini.
Ingat untuk memeriksa jawabanmu!



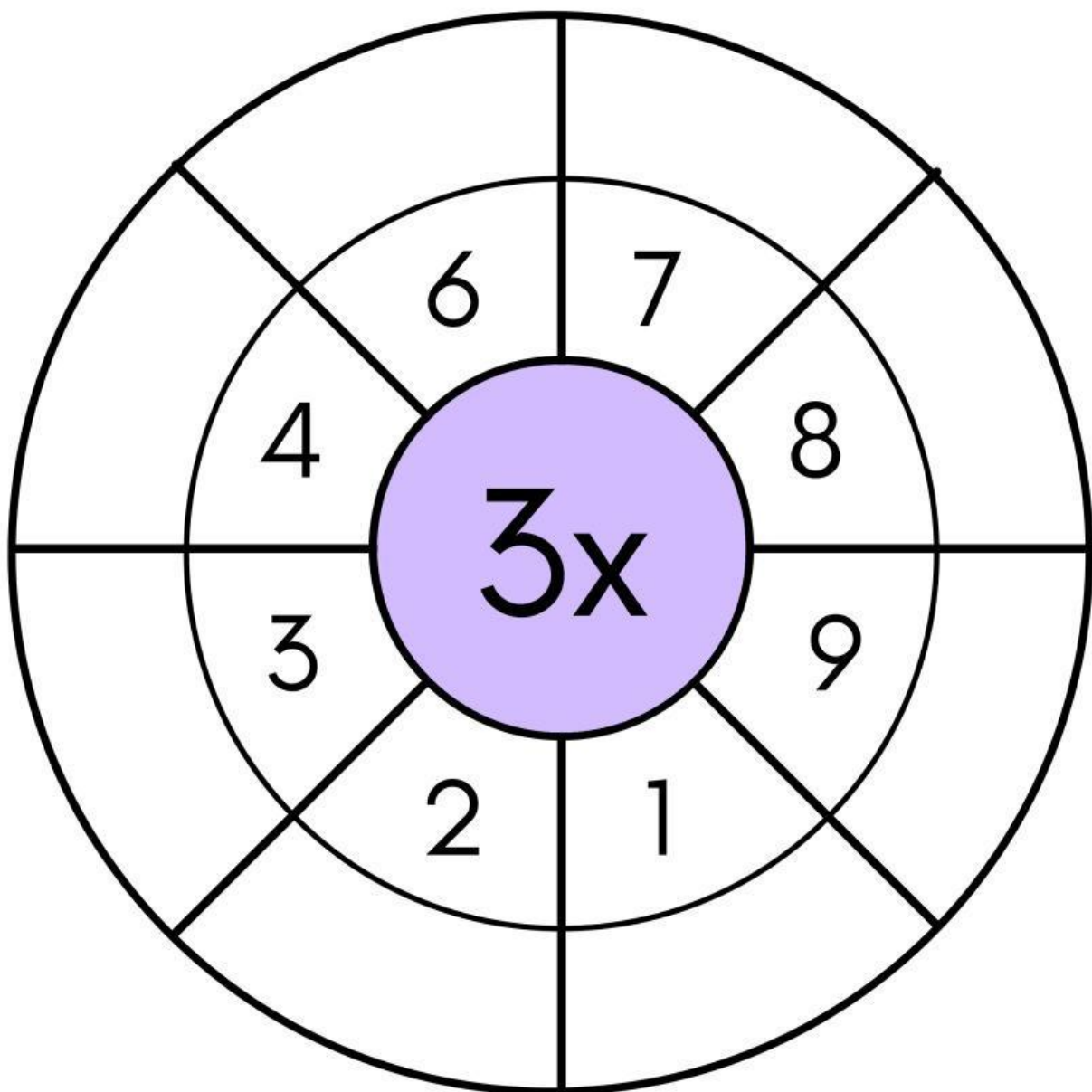
RODA PERKALIAN

Lengkapi roda-roda perkalian ini.
Ingat untuk memeriksa jawabanmu!



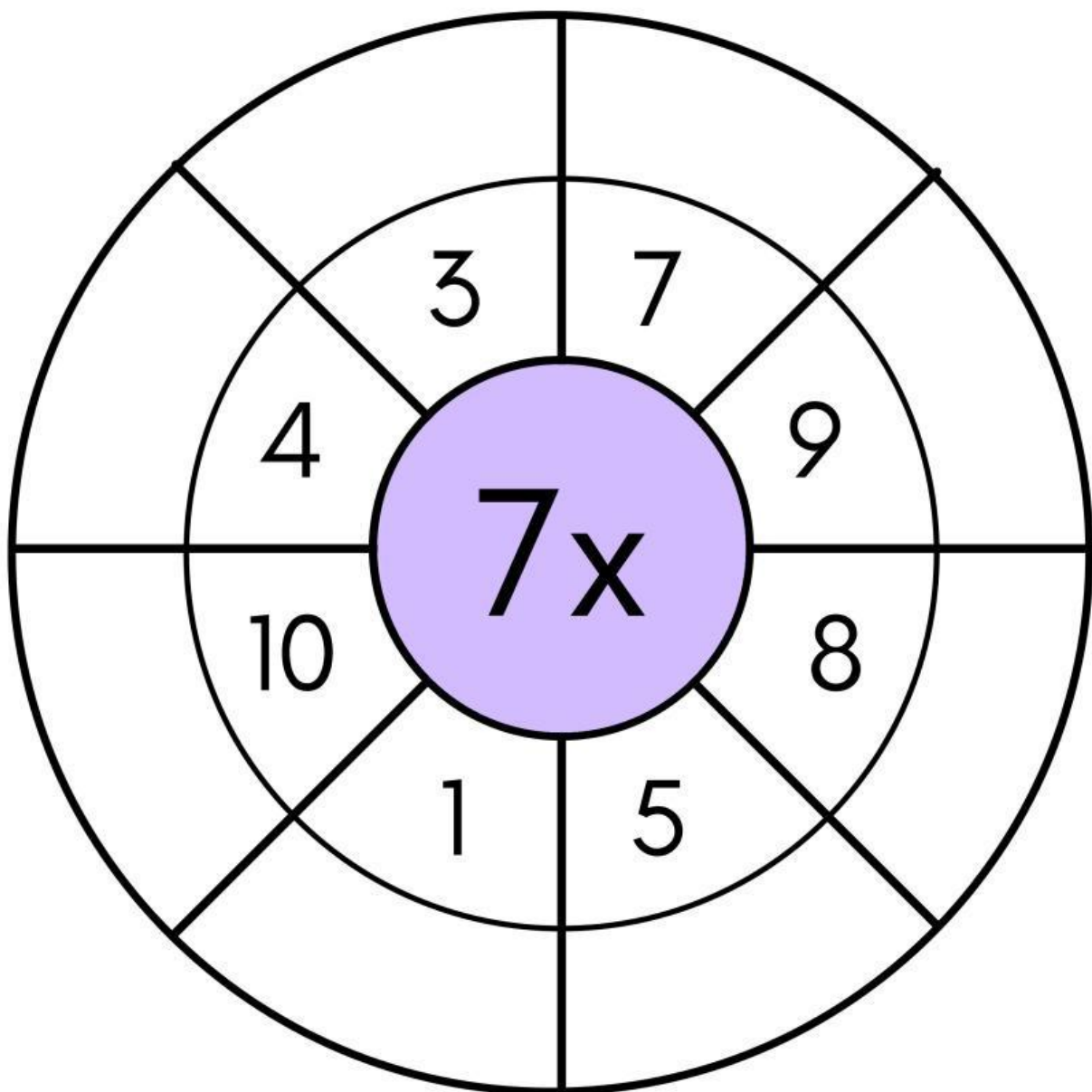
RODA PERKALIAN

Lengkapi roda-roda perkalian ini.
Ingat untuk memeriksa jawabanmu!



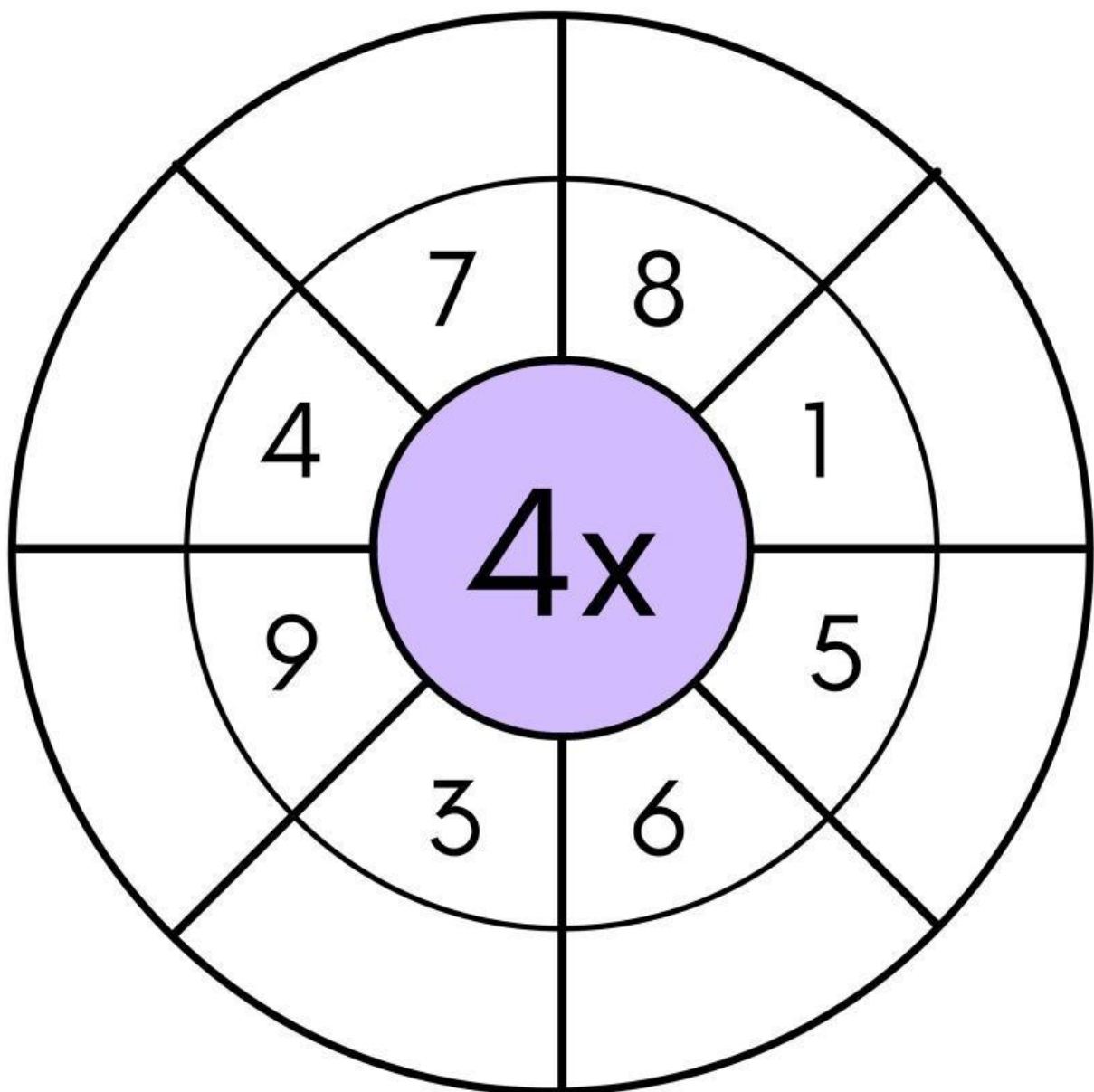
RODA PERKALIAN

Lengkapi roda-roda perkalian ini.
Ingat untuk memeriksa jawabanmu!



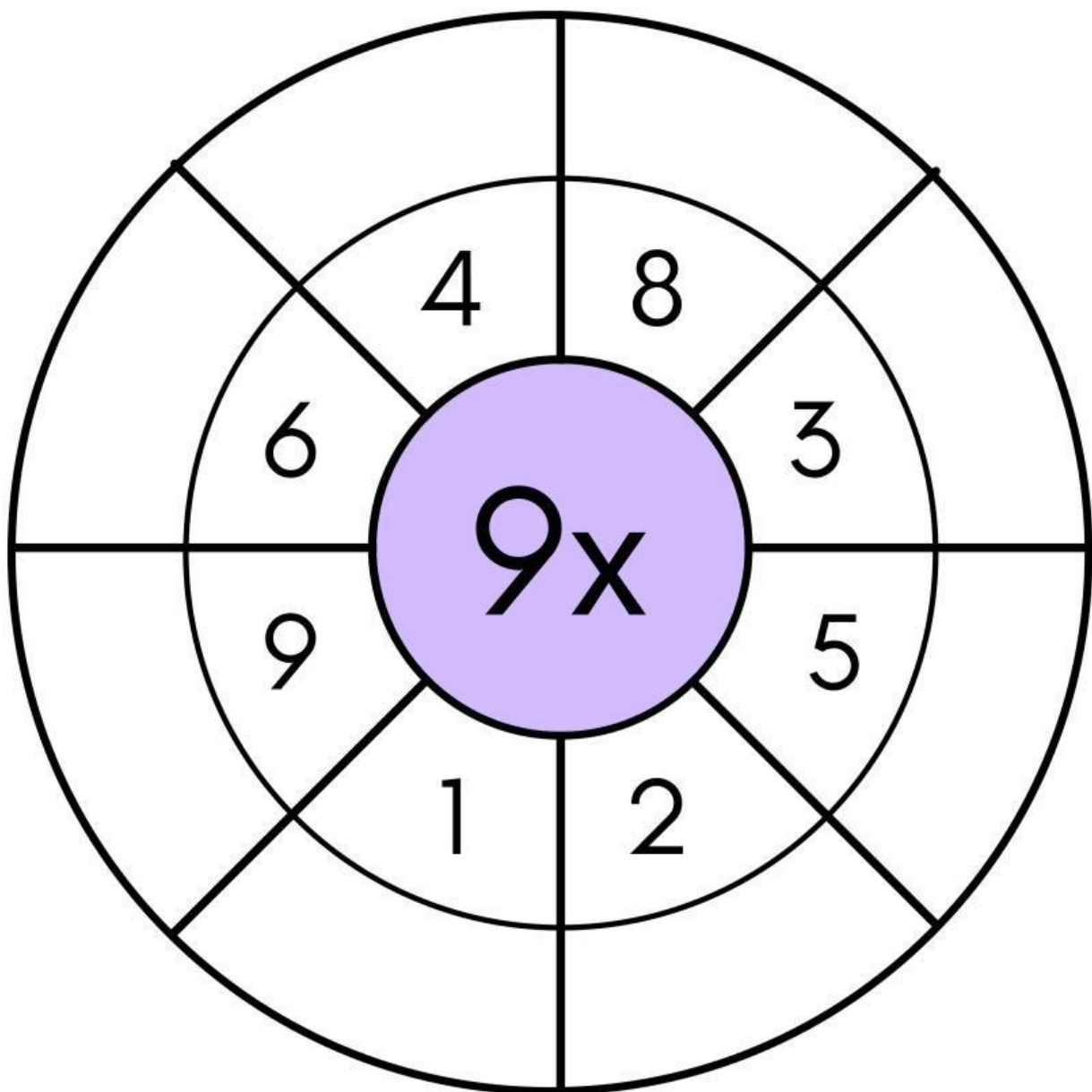
RODA PERKALIAN

Lengkapi roda-roda perkalian ini.
Ingat untuk memeriksa jawabanmu!



RODA PERKALIAN

Lengkapi roda-roda perkalian ini.
Ingat untuk memeriksa jawabanmu!



PERKALIAN

Lengkapi perkalian di bawah ini!



$5 \times 2 = \underline{\quad}$

$2 \times 9 = \underline{\quad}$

$4 \times 4 = \underline{\quad}$

$3 \times 6 = \underline{\quad}$

$8 \times 2 = \underline{\quad}$

$7 \times 3 = \underline{\quad}$

$4 \times 5 = \underline{\quad}$

$2 \times 7 = \underline{\quad}$

$9 \times 1 = \underline{\quad}$

$3 \times 3 = \underline{\quad}$



$9 \times 3 = \underline{\quad}$

$5 \times 5 = \underline{\quad}$

$6 \times 4 = \underline{\quad}$

$4 \times 7 = \underline{\quad}$

$3 \times 4 = \underline{\quad}$

$6 \times 6 = \underline{\quad}$

$9 \times 5 = \underline{\quad}$

$5 \times 7 = \underline{\quad}$

$1 \times 6 = \underline{\quad}$

$4 \times 8 = \underline{\quad}$



$8 \times 8 = \underline{\quad}$

$6 \times 9 = \underline{\quad}$

$7 \times 8 = \underline{\quad}$

$8 \times 6 = \underline{\quad}$

$8 \times 8 = \underline{\quad}$

$7 \times 9 = \underline{\quad}$

$9 \times 9 = \underline{\quad}$

$8 \times 7 = \underline{\quad}$

$9 \times 8 = \underline{\quad}$

$7 \times 7 = \underline{\quad}$



TABEL PERKALIAN



IKUTI SETIAP BARIS DAN KOLOM. LALU KALIKAN ANGKA-ANGKA TERSEBUT. ISI TABEL LENGKAP UNTUK MENUNJUKKAN SEMUA FAKTA PERKALIANMU!

	1	2	3	4	5	6	7	8	9	10
1	1	2								
2	2	4								
3										
4										
5										
6										
7										
8										
9										
10										