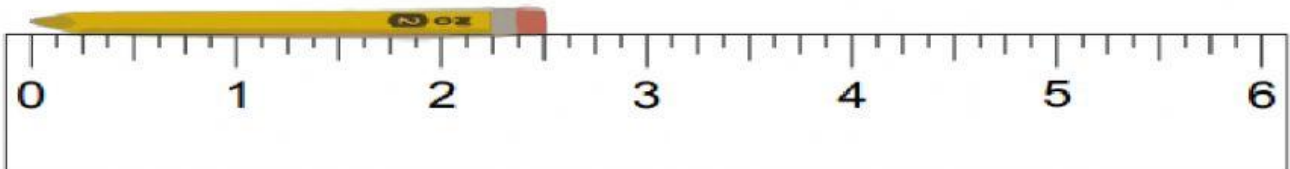


MEASURE WITH RULER #1

HOMEWORK
3/17/2021

DIRECTIONS: Identify the fraction placement on the ruler. **USE YOUR NOTES!!!**
Place a space between your whole number and your fraction. For example: 3 $\frac{1}{4}$

1. Measure to the nearest inch.



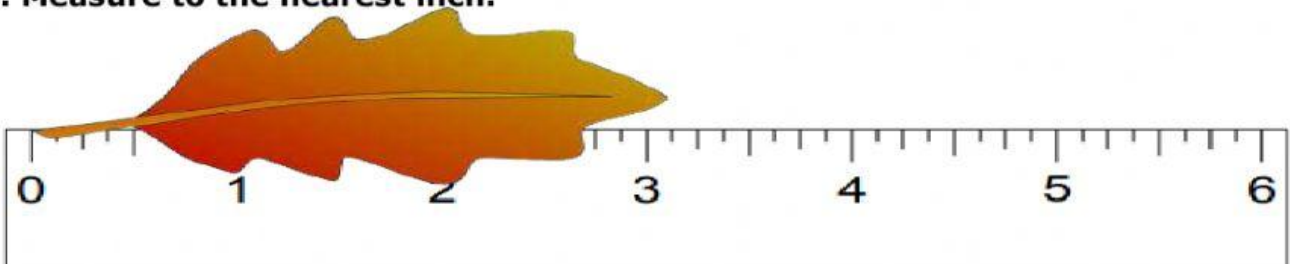
a. 2 $\frac{1}{2}$ inches

b. 2 $\frac{1}{4}$ inches

c. 2 $\frac{3}{4}$ inches

d. 2 $\frac{1}{8}$ inches

2. Measure to the nearest inch.



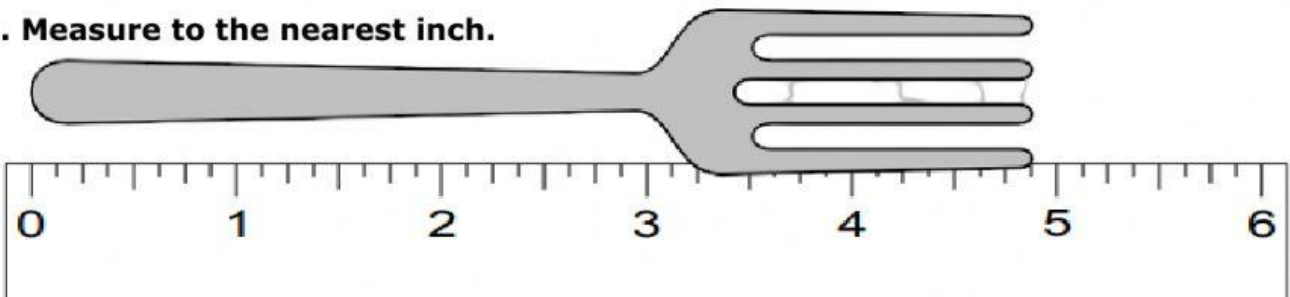
a. 3 $\frac{1}{2}$ inches

b. 3 $\frac{1}{4}$ inches

c. 3 $\frac{3}{4}$ inches

d. 3 $\frac{1}{8}$ inches

3. Measure to the nearest inch.



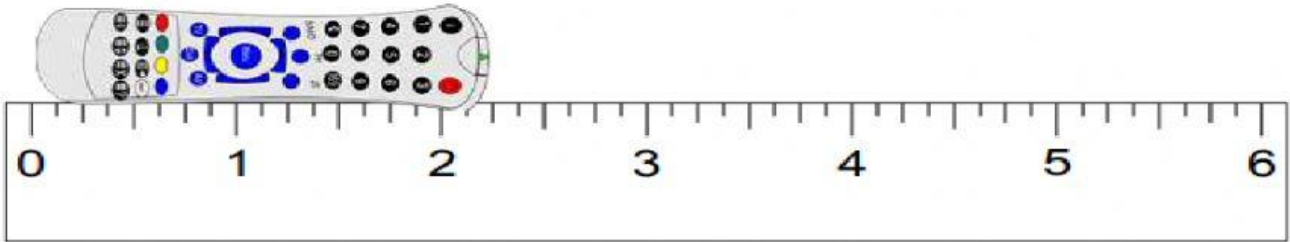
a. 4 $\frac{3}{4}$ inches

b. 4 $\frac{7}{8}$ inches

c. 4 $\frac{3}{8}$ inches

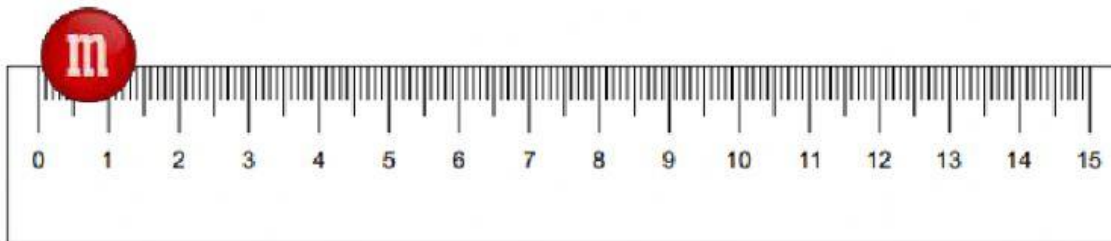
d. 4 $\frac{1}{8}$ inches

4. Measure to the nearest inch.



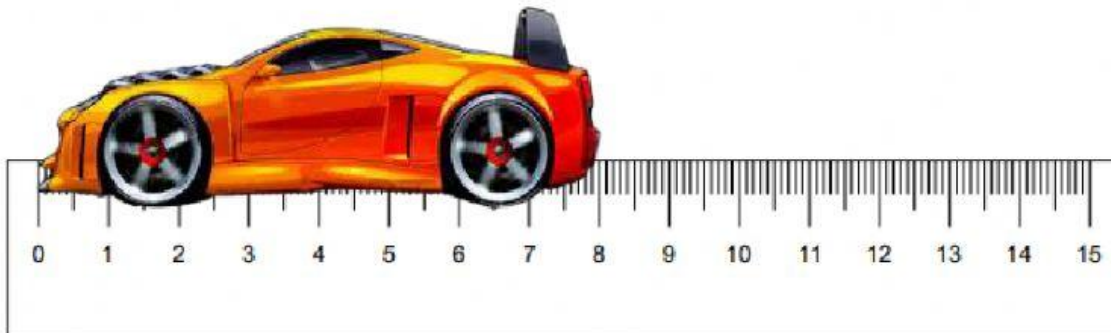
- | | | | |
|------------------------|------------------------|------------------------|------------------------|
| a. 2 1/2 inches | b. 2 3/4 inches | c. 2 1/4 inches | d. 2 1/8 inches |
|------------------------|------------------------|------------------------|------------------------|

5. Measure to the nearest millimeter.




- | | | | |
|--------------------------|--------------------------|--------------------------|--------------------------|
| a. 10 millimeters | b. 19 millimeters | c. 14 millimeters | d. 18 millimeters |
|--------------------------|--------------------------|--------------------------|--------------------------|

6. Measure to the nearest centimeter.



- | | | | |
|-------------------------|--------------------------|-------------------------|-------------------------|
| a. 8 centimeters | b. 80 centimeters | c. 9 centimeters | d. 7 centimeters |
|-------------------------|--------------------------|-------------------------|-------------------------|

7. Measure to the nearest millimeter.



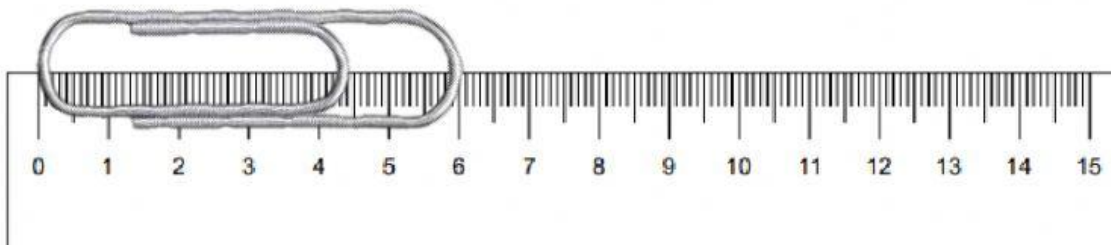
a. 20 millimeters

b. 2 millimeters

c. 3 millimeters

d. 30 millimeters

8. Measure to the nearest centimeter.



a. 60 centimeters

b. 600 centimeters

c. 6 centimeters

d. 16 centimeters