

Date:		Grade:	Third grade
Subject:	Self-Contained	Teacher:	
Name:			
Activity:	Knowledge assessment Math		


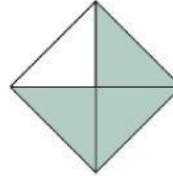

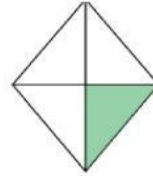
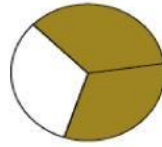
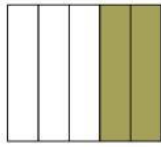
## Knowledge assessment Unit 5-6 - Math

1. Cut and paste the pictures below the corresponding Carroll.

	Herbivorous	Carnivorous
Terrestrial animals		
Aquatic animals		



2. Write the fraction the shaded parts of each shape represent:



3. Solve the next problem-solving:

- a. If a teacher has **40** students and wants to divide them into groups of **8**, how many groups will there be?

