





Name: \_\_\_\_\_

## ADDING ONE

Match the addends with correct sums.



















Name: \_\_\_\_\_

Class: \_\_\_\_\_

# Finger addition

Count the fingers, fill in the boxes and complete the additions.

 $+$   
  $+$    $=$   $+$   
  $+$    $=$   $+$   
  $+$    $=$   $+$   
  $+$    $=$   $+$   
  $+$    $=$   $+$   
  $+$    $=$   $+$   
  $+$    $=$   $+$   
  $+$    $=$



$$3 + 1 = \dots\dots\dots$$



$$1 + 3 = \dots\dots\dots$$



$$2 + 2 = \dots\dots\dots$$



$$3 + 3 = \dots\dots\dots$$



$$1 + 4 = \dots\dots\dots$$



$$2 + 4 = \dots\dots\dots$$