







# WORKSHEET TO READ, WRITE AND MODEL NUMBERS TO 999


Write how many hundreds, tens, and ones.  
Then write the number.

1. 3 , 2 , and 4  \_\_\_\_\_

hundreds	tens	ones

2. 1 , 3 , and 8  \_\_\_\_\_

hundreds	tens	ones

3. 4 , 1 , and 3  \_\_\_\_\_

hundreds	tens	ones

Write how many hundreds, tens, and ones.

4.  $536 =$  \_\_\_\_\_ hundreds, \_\_\_\_\_ tens, and \_\_\_\_\_ ones

5.  $295 =$  \_\_\_\_\_ hundreds, \_\_\_\_\_ tens, and \_\_\_\_\_ ones

Solve. Draw base-ten blocks to model.

6. Salem has 342 pencils.  
How many tens does he have?

\_\_\_\_\_ tens

