



Intervals I

Identify the interval in each of the following exercises:


Exercise 1: These two notes are a _____ apart.




Exercise 2: These two notes are a _____ apart.




Exercise 3: These two notes are a _____ apart.



Exercise 4: These two notes are a _____ apart.



Exercise 5: These two notes are a _____ apart.



Exercise 6: These two notes are a _____ apart.

