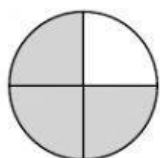




Escribe la fracción utilizando la barra inclinada

1

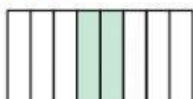
1)



$3/4$

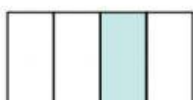
Se lee

4)



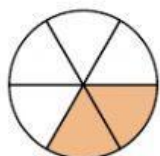
Se lee

7)




Se lee

10)



Se lee

13)



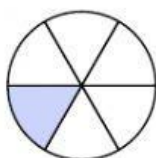
Se lee

16)



Se lee

2)



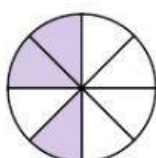
Se lee

5)



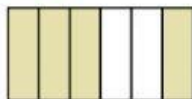
Se lee

8)



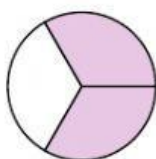
Se lee

11)



Se lee

14)



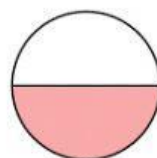
Se lee

17)



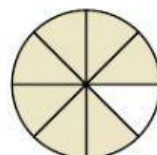
Se lee

3)



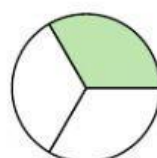
Se lee

6)



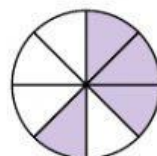
Se lee

9)



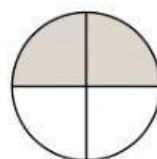
Se lee

12)



Se lee

15)



Se lee

18)



Se lee