



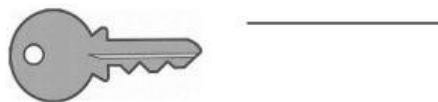
Revision in Science

Name: _____




Draw a line from the magnet to the things it will attract.



Write M for magnetic and NM for non-magnetic.



For each pair of magnets, write **attract** or **repel**.



Write N for natural and MN for man-made.























Draw lines to match each animal with its mother.



Write C for carnivores.

Write H for herbivores.

Write O for omnivores.

cow _____

lion _____

deer _____

bird _____

horse _____

tiger _____

giraffe _____

goat _____

leopard _____

pig _____

True or False.

1. Cow is carnivore. _____
2. Lion is carnivore. _____
3. Puppy is the baby of the tiger. _____
4. Kitten is the baby of the cat. _____
5. Sheep is herbivore. _____
6. Dog is a pet animal. _____
7. Tiger is a farm animal. _____
8. Giraffe is a farm animal. _____
9. Duckling is the baby of the dog. _____
10. The cat says moo. _____

Write the names of the animals


Star Fish

Whale

Octopus

Dolphin

Shark



I am a



I am a



I am a



I am a

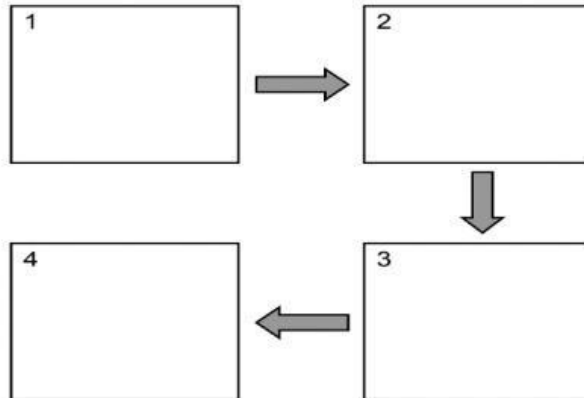


I am a

Write inside the box the life cycle of a butterfly.



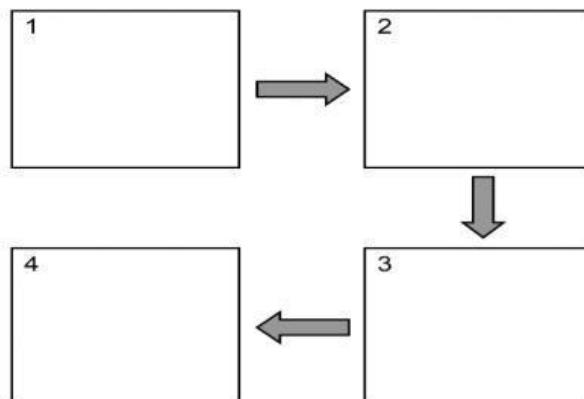
caterpillar butterfly pupa egg



Write inside the box the life cycle of a frog.



egg froglet frog tadpole



Write F for farm animal, P for pet, W for water and Z for zoo animal.

- | | |
|------------------|----------------|
| 1. sheep _____ | 2. bear _____ |
| 3. whale _____ | 4. shark _____ |
| 5. gorilla _____ | 6. cat _____ |

Match the animal with its home. Write in the name of the home.


chicken coop

cave

coral reefs

spiderweb









© 2015 - 2020 by LiveWorksheets

Draw a line from each animal to what it eats.

