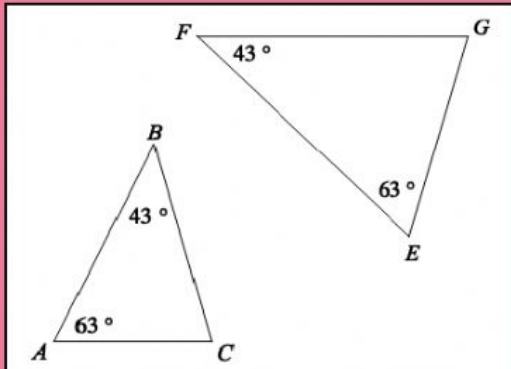
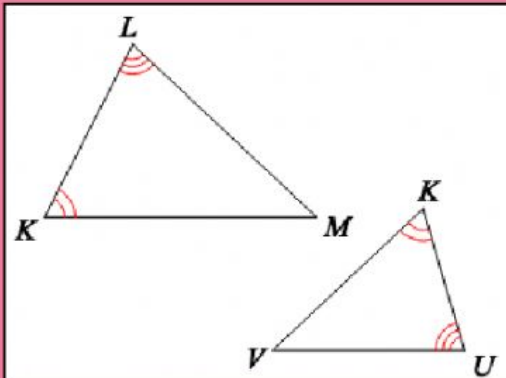


## Similar Triangles Practice

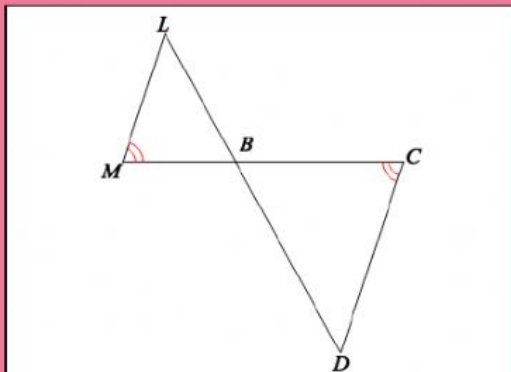
Write the similarity statement



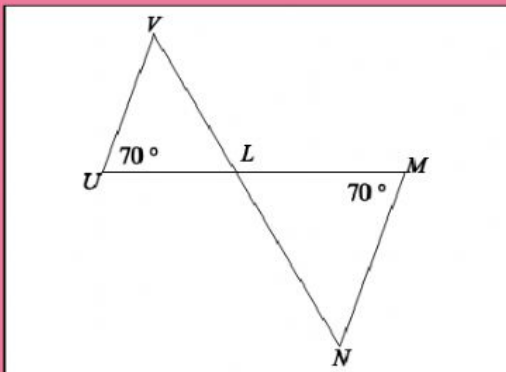
$\triangle \underline{\hspace{1cm}} \sim \triangle \underline{\hspace{1cm}}$



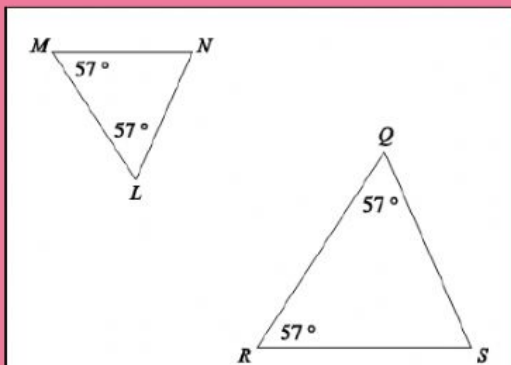
$\triangle \underline{\hspace{1cm}} \sim \triangle \underline{\hspace{1cm}}$



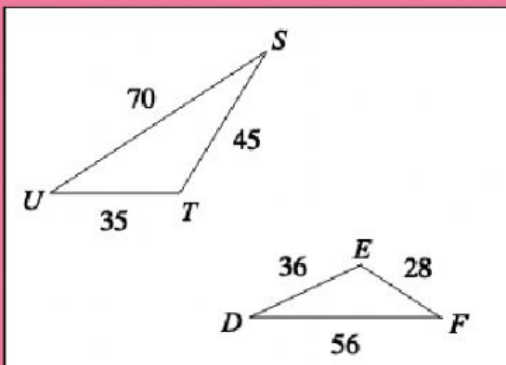
$\triangle \underline{\hspace{1cm}} \sim \triangle \underline{\hspace{1cm}}$



$\triangle \underline{\hspace{1cm}} \sim \triangle \underline{\hspace{1cm}}$



$\triangle \underline{\hspace{1cm}} \sim \triangle \underline{\hspace{1cm}}$



$\triangle \underline{\hspace{1cm}} \sim \triangle \underline{\hspace{1cm}}$