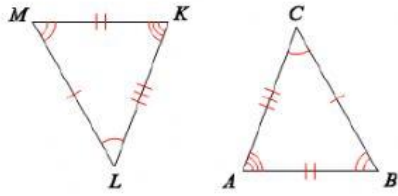


Congruent Triangles Practice

Complete each congruence statement

$$\triangle LMK \cong \triangle CBA$$

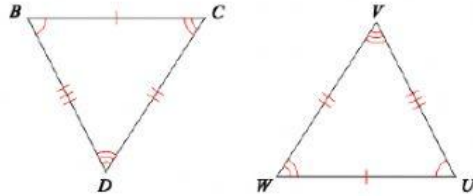


$\angle M \cong \underline{\hspace{1cm}}$

$\angle K \cong \underline{\hspace{1cm}}$

$\angle L \cong \underline{\hspace{1cm}}$

$$\triangle BCD \cong \triangle UWV$$

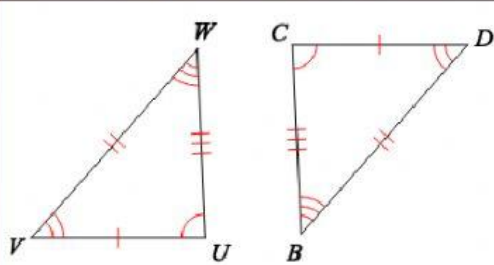


$UW \cong \underline{\hspace{1cm}}$

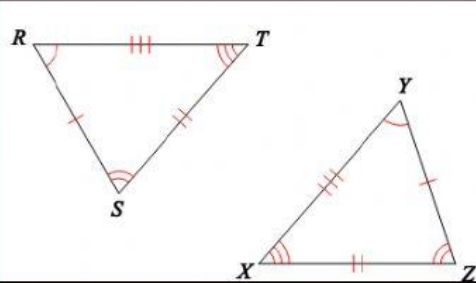
$WV \cong \underline{\hspace{1cm}}$

$VU \cong \underline{\hspace{1cm}}$

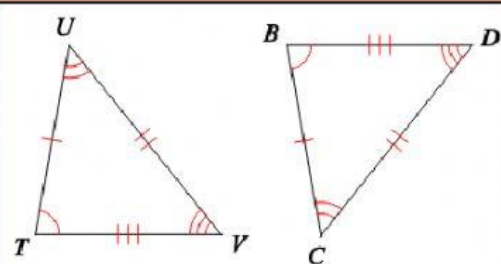
Write the congruence statement



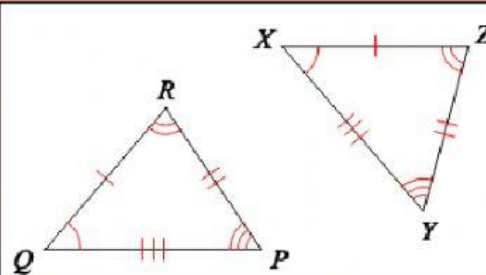
$\triangle \underline{\hspace{1cm}} \cong \triangle \underline{\hspace{1cm}}$



$\triangle \underline{\hspace{1cm}} \cong \triangle \underline{\hspace{1cm}}$



$\triangle \underline{\hspace{1cm}} \cong \triangle \underline{\hspace{1cm}}$



$\triangle \underline{\hspace{1cm}} \cong \triangle \underline{\hspace{1cm}}$