

Name: _____



Time by the Hour


Directions: Write the time for each clock.




:00



:00




:00



:00



:00



:00




:00



:00



:00



:00

© Annie Moffatt • The Moffatt Girls 2013