




Mathematics

Concepts Numbers 0-100



😊 How many tens and ones?



_____tens _____ones = _____ _____tens _____ones = _____

♥ Write greater than > < less than or equal to =

a. 75 ○ 65

b. 41 ○ 57

c. 99 ○ 99

d. 9 ○ 3

e. 15 ○ 15

f. 29 ○ 35

☀ Write the number that comes before, after or between.

g. _____, 57

h. _____, 49

i. _____, 77

j. 88, _____

k. 34, _____

l. 25, _____

m. 7, _____, 9

n. 19, _____, 21

o. 66, _____, 68

☁ Fill in the missing numbers.

p. 89 = _____tens and _____ones

q. 54 = _____tens and _____ones

r. 95 = _____tens and _____ones

⚡ Write the number called by your teacher.

s. _____

t. _____

u. _____

v. _____

w. _____

x. _____

y. _____

z. _____