


Forces

REVISION WORKSHEET

weight	gravity	magnetic	contact	non-contact
push	pull	upthrust	balanced	unbalanced

1. Name the forces affecting the object in each picture. Label with force arrows ($\uparrow \downarrow \rightarrow \leftarrow$) to show the force's movement. Use the vocabulary at the top of the page as needed.

[illegible]


Forces

REVISION WORKSHEET

Answer key

weight	gravity	magnetic	contact	non-contact
push	pull	upthrust	balanced	unbalanced


1. Name the forces affecting the object in each picture. Label with force arrows (\uparrow \downarrow \rightarrow \leftarrow) to show the force's movement. Use the vocabulary at the top of the page as needed.




magnetic force (non-contact, pull force)



push contact force + gravity



contact, push force, unbalanced



contact, push pull force, unbalanced