



MARIEPHITHAK PHANGKHON SCHOOL  
SEMESTER 2 MID – TERM EXAMINATION FOR 2024/25  
**MATHEMATICS PAPER 2 ELCP 1**

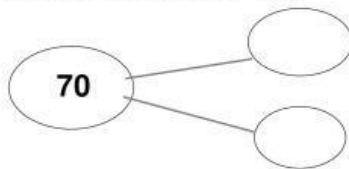
Name: \_\_\_\_\_ Number: \_\_\_\_\_ Class: 1/ \_\_\_\_\_

Write down your answer for each question as best as you can.

1. **Nai** buys **16** green apples and **22** red apples. How many apples did he buy **in total**?

$$\square + \square = \square \text{ apples}$$

2. Which numbers make **70**?



**Look at the image and answer questions 3 to 5**



3. Who is the first?

\_\_\_\_\_

4. Who may be the last?

\_\_\_\_\_

5. How many runners can you see?

\_\_\_\_\_

6. If you have **24 Lego blocks** and your dad buys **19 more**. How many do you have **in total**?

7. Fill the missing number.

0	20	40	60		100
---	----	----	----	--	-----

8. There are 24 students in your class. If 11 are boys, how many are girls?

$$\square - \square = \square$$

9. Write the missing number.

95 , 85 ,  $\square$  , 65 , 55 , 45 , 35

10. Find the value

$$\begin{array}{|c|c|} \hline 2 & 4 \\ \hline + & \\ \hline 6 & 3 \\ \hline \end{array}$$

11. Find the value

$$\begin{array}{|c|c|} \hline 7 & 7 \\ \hline - & \\ \hline 4 & 0 \\ \hline \end{array}$$

12. Which number comes after 92?

---

13. Tom has **60 cupcakes** on his birthday. He gives **fifty-one** to his friends. How many are left?

$$\square \quad \square \quad \square = \square$$

14. You have **50 baht**. You buy hotdogs for **35 baht**. How much do you have *left*?

15. Write a number **less than** 76.

---

16. Write a number bigger than 55.

---

17. What is the value of  
**5 tens + fifteen?**

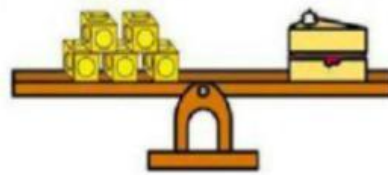
---

18. Which animal is the first?

(Elephant, Monkey, bear, Horse, Giraffe, Lion)




19.



The slice of cake weighs  cubes.

20. Which is **heavier**?



Good Luck!