

## REVISION FOR 2<sup>nd</sup> SEMESTER TEST

1. Choose the longer things.

a)




b)



c)




d)




2. Choose the lighter animal in each box.

a)



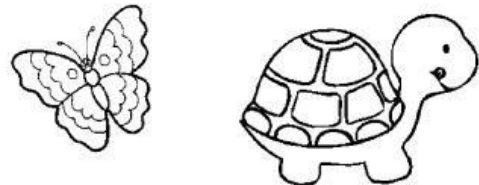
b)




c)




d)



e)



f)



### 3. Fill in the blanks.

- a) 2 dm = ...**20**... cm      b) 3 dm = ..... cm      c) 6 dm = ..... cm  
 d) 90 cm = ..... dm      e) 20 cm = ..... dm      f) 50 cm = ..... dm
- g) 11kg + 2kg = ...**13**..... kg      h) 87kg – 12 kg = ..... kg  
 i) 17kg + 22kg = ..... kg      j) 40kg – 15kg = ..... kg

### 4. Calculate and write.

Operation	Word form
$2 \times 3 = 6$	<i>2 times 3 equals 6.</i>
$10 : 5 = 2$	<i>10 divided by 5 equals 2.</i>
a) $14 : 2 =$	
b) $5 \times 5 =$	
c) $35 : 5 =$	
d) $5 \times 8 =$	

### 5. Look and write T (True) or F (False).

Fruits	Kim	May	Lisa
	3	9	5
	2	7	4

- a) Tom has 3 pineapples.  
 b) May has 9 apples.  
 c) Lisa has 4 pineapples and 5 apples.  
 d) Kim and Lisa have 8 pineapples altogether.

T