

1) How many groups of 2? ____




2) How many groups of 3? ____




3) How many groups of 4? ____




4) How many groups of 2? ____



5) How many groups of 3? ____



1) Divide the 8 apples into groups of 2. How many groups? ____




Division sentence: $8 \div 2 = \underline{\quad}$

2) Divide the 6 oranges into groups of 3. How many groups? ____



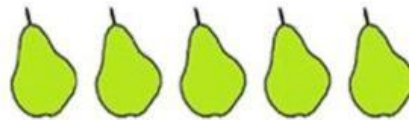
Division sentence: $6 \div 3 = \underline{\quad}$

3) Divide the 12 bananas into groups of 4. How many groups? ____



Division sentence: $12 \div 4 = \underline{\quad}$

4) Divide the 5 pears into groups of 5. How many groups? ____



Division sentence: $5 \div 5 = \underline{\quad}$

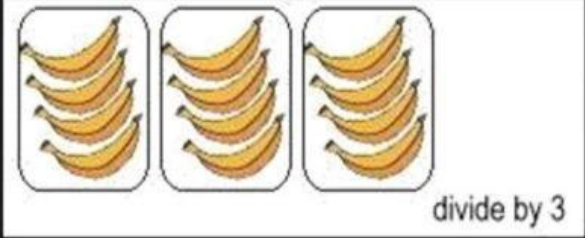

5) Divide the 9 nectarines into groups of 3. How many groups? ____







Division sentence: $9 \div 3 = \underline{\quad}$



Dividing: Sharing can be fun!



Share the goodies in each box by the number given. Write the answer in the box.

1.  = 

2.  = 

3.  = 

4.  = 

5.  = 

Fun Division

How many equal groups you can circle,
write below.

I am.....



$$12 \div 4 = \underline{\quad}$$

$$6 \div 3 = \underline{\quad}$$

$$8 \div 2 = \underline{\quad}$$

$$14 \div 2 = \underline{\quad}$$

$$10 \div 2 = \underline{\quad}$$

$$6 \div 2 = \underline{\quad}$$

$$10 \div 5 = \underline{\quad}$$

$$9 \div 3 = \underline{\quad}$$

$$12 \div 6 = \underline{\quad}$$

$$4 \div 2 = \underline{\quad}$$

$$12 \div 2 = \underline{\quad}$$

$$8 \div 4 = \underline{\quad}$$

Find us on YouTube and
Amazon Store
Lucas & Friends



More worksheets at
www.RvAppStudios.com

