

UNIT 8: FRACTIONS

Lesson 1: Like fractions and unlike fractions

1. Look and write the word form.

a)

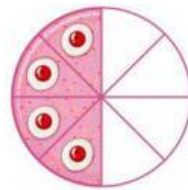


Four over six

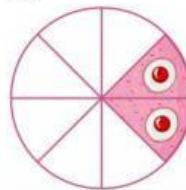
b)



c)



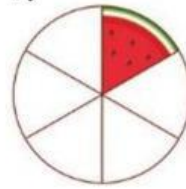
d)



e)



f)



g)



h)



2. Choose the correct answer.

a) In the fraction $\frac{1}{7}$, the numerator is _____

A. 1

B. 7

b) In the fraction $\frac{11}{2}$, the denominator is _____

A. 11

B. 2

c) _____ are like fractions.

A. $\frac{11}{2}$ and $\frac{7}{2}$

B. $\frac{6}{7}$ and $\frac{3}{2}$

d) _____ are unlike fractions.

A. $\frac{1}{5}$ and $\frac{17}{5}$

B. $\frac{2}{9}$ and $\frac{4}{3}$