



Math Exam

Name: _____

Date: Friday, March 12th, 2021



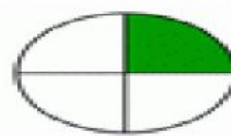
Read and Write the numbers.

three hundred sixty-seven	367
four hundred twelve	
eight hundred seventy-five	
one hundred fifty-eight	
seven hundred sixteen	
five hundred one	
two hundred forty-two	

Write the fraction of the shape.

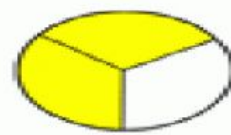


1

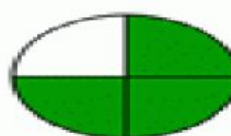


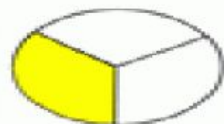


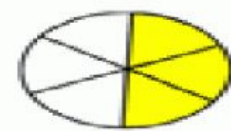
6







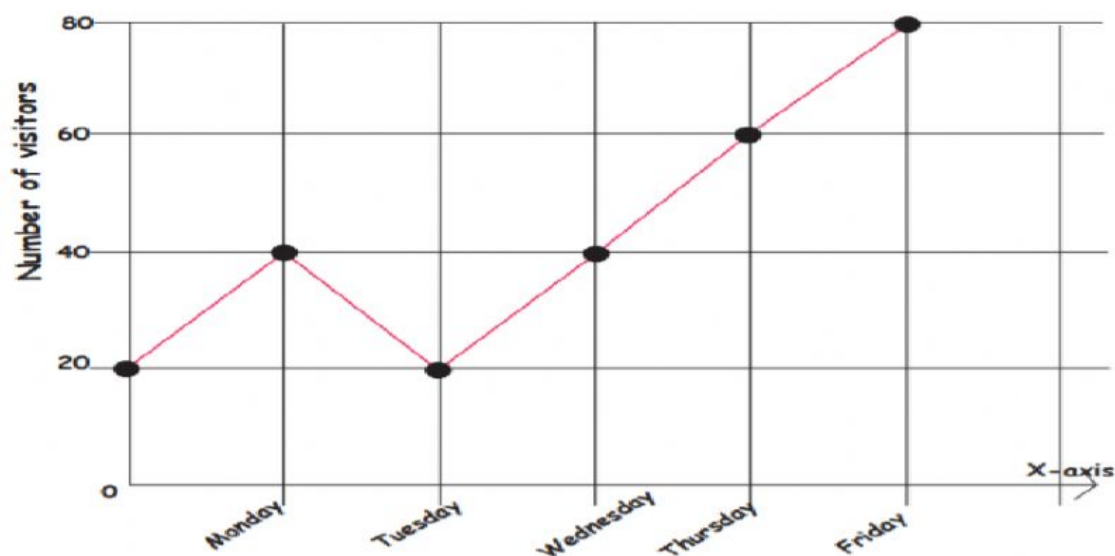




Write the correct number next to each Roman numeral.

- | | | | | | | | |
|----|-----|---|-------|-----|------|---|-------|
| 1) | II | = | _____ | 8) | IX | = | _____ |
| 2) | V | = | _____ | 9) | XII | = | _____ |
| 3) | IV | = | _____ | 10) | XV | = | _____ |
| 4) | X | = | _____ | 11) | XX | = | _____ |
| 5) | III | = | _____ | 12) | XIX | = | _____ |
| 6) | VI | = | _____ | 13) | XVII | = | _____ |
| 7) | XI | = | _____ | 14) | XIV | = | _____ |

Look at the graph and answer.



- How many visitors came in on Monday ?
- How many visitors came in on Tuesday ?
- How many visitors came in on Wednesday ?
- Which day had the highest number of visitors ?

Complete the pattern and write the rule.

19, __, __, __, __, __, 67, 75 Rule: _____

__, __, __, 39, __, 59, __, 79 Rule: _____

Write a check to your Mom, you should pay \$325.16 dollars to her.

Date _____	
PAY TO THE ORDER OF _____	\$ <input type="text"/>
_____ Dollars	

Answer.

$7 \times 3 = \boxed{}$

$6 \times 4 = \boxed{}$

$5 \times 9 = \boxed{}$

$4 \times 3 = \boxed{}$

$3 \times 6 = \boxed{}$

$2 \times 8 = \boxed{}$

$7 \times 7 = \boxed{}$

$6 \times 8 = \boxed{}$

$5 \times 0 = \boxed{}$

$7 \times 8 = \boxed{}$

$6 \times 7 = \boxed{}$

$5 \times 6 = \boxed{}$

$4 \times 7 = \boxed{}$

$3 \times 9 = \boxed{}$

$2 \times 6 = \boxed{}$

$4 \times 4 = \boxed{}$

$3 \times 8 = \boxed{}$

$2 \times 4 = \boxed{}$