



worksheetspack

Movement

Grade 3

Name:

Date:

Fill in the boxes.



mall



school



tree



Emma



Jack



cafe



home



museum

- (a) If Jack makes a quarter turn clockwise, he will face the: _____
- (b) If Jack makes a whole turn anti-clockwise, he will face the: _____
- (c) If Emma makes a half turn clockwise, she will face the: _____
- (d) If Jack makes a half turn clockwise, he will face the: _____
- (e) If Emma makes a quarter turn anti-clockwise, she will face the: _____



worksheetspack

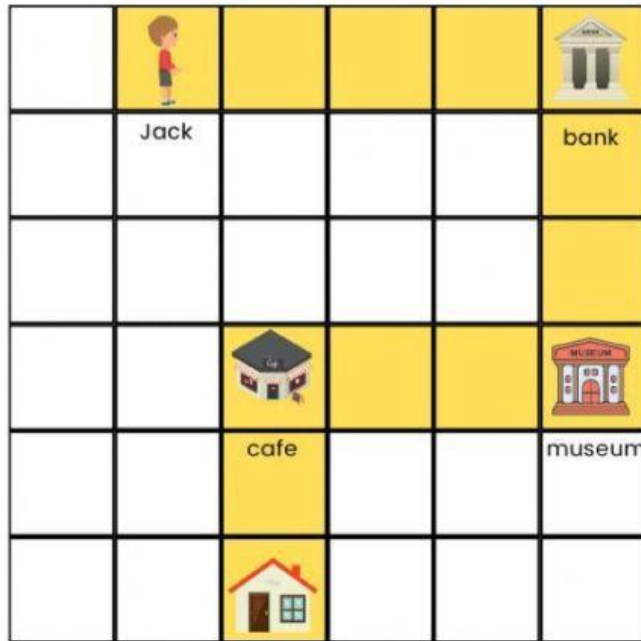
Movement

Grade 3

Name:

Date:

Fill in the boxes.



Jack is facing the bank.
He wants to follow the path.

2

3

quarter

forward

clockwise

anti-clockwise

- (a) Jack moves 4 squares _____ to go to the bank.
- (b) Then, he makes a _____ turn clockwise and moves _____ squares forward to go to the museum.
- (c) Then, he makes a quarter turn _____ and moves 3 squares forward to go to the cafe.
- (d) Then, he makes a quarter turn _____ and moves _____ squares forward to go to the home.











www.worksheetspack.com

 **LIVEWORKSHEETS**

 **LIVEWORKSHEETS**


Tick the correct box.

6						
5						
4						
3						
2						
1						
	A	B	C	D	E	F

(a) At position C4



(b) At position E6



(c) At position D3



(d) At position B5





worksheetspack









Movement

Grade 3

Name:

Date:

Fill in the boxes.

6						
5						
4						
3						
2						
1						
	A	B	C	D	E	F

- (a) The dog is at _____.
- (b) The bee is at _____.
- (c) The cow is at _____.
- (d) The fish is at _____.
- (e) The _____ is at C3.
- (f) The _____ is at A2.
- (g) The _____ is at B5.
- (h) The _____ is at C1.