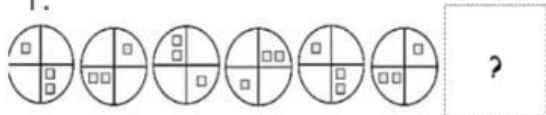
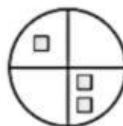


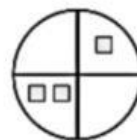
1. What is the next shape in the pattern?



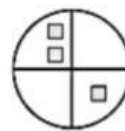
A




B



C




2. What is the next shape in the pattern?



A



B



C



3. Which shape is a pentagon?

A



B



C



4. Which shape is an Octagon?


a.



b.



c.

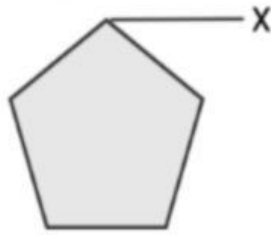


5. What is the part labeled X?

a. Flat face

b. Vertex

c. Straight line



6. Which object is shaped like an octagon?

a.



b.



c.

