

My name is: _____

WORKSHEET

Date: 03/03/2025
PPD-A4



Teacher's feedbacks

Task 1: Listen and match. (Nghe và nối nhé.)



1

2

3

4

5

6



Task 2: Listen and tick. (Nghe và đánh dấu nhé.)


1. What shape do you see?
I see a...



5. How many sides does the triangle have?
The triangle has 3 sides.




2. What shape do you see?
I see a...



6. How many sides does the heart have?
The heart has no side.




3. What shape do you see?
I see a...



7. How many sides does the square have?
The square has 4 equal sides.



4. What shape do you see?
I see a...



8. How many sides does the rectangle have?
The rectangle has 2 long sides and 2 short sides.

