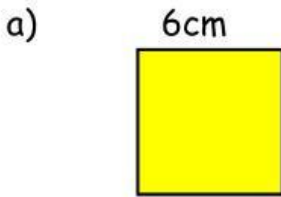


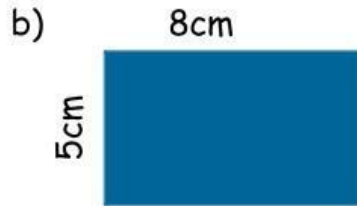
UNIT 7: PERIMETER AND AREA

Lesson 2: Perimeter of a square and a rectangle

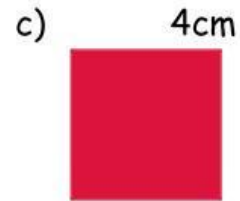
1. Find perimeter of the shapes below.



Perimeter =



Perimeter =




Perimeter =

2. Find the perimeter of the picture.

Solution:

The perimeter of the picture is:



Answer:

3. The square mat has the side of 1m. Find the perimeter of the mat.

Solution:

The perimeter of the mat is:



Answer: