









SO ORIENTARMI IN UNA MAPPA

SCRIVO LA POSIZIONE DI OGNI
ELEMENTO DELLA MAPPA.

| | | | | |
|---|--|---|--|---|
| 4 | | |  | |
| 3 | |  | |  |
| 2 |  | | | |
| 1 | |  | |  |
|  | A | B | C | D |



→ (,)




→ (,)



→ (,)



→ (,)



→ (,)



→ (,)