







**A Chose the correct answer. What are the characteristics of ecosystems?**

- a) Temperature, soil, sunlight, and amount of water.
- b) Climate, oceans, grass, and amount of soil.
- c) Season, soil, sunlight, and amount of grass.

**B Match the living things to their names and habitats.**

1		<input type="checkbox"/> monkey	<input type="checkbox"/> savanah	
2		<input type="checkbox"/> zebra	<input type="checkbox"/> arctic	
3		<input type="checkbox"/> polar bear	<input type="checkbox"/> rainforest	

**C Classify the ecosystems**

pond      desert      choral reef      jungles

Aquatic	Terrestrial

**D Write the names of two animals that live in the ecosystems**

Desert	Forest

**E Connect the phrases to complete the sentences**

Mass is ●

- the space that an object occupies

Volume is •

- the amount of matter in an object

**F Match the states of matter with their forms and characteristics**

1 Solid ●

- water



has own shape, keeps same volume

2 Liquid •

- vapor



does not keep the same shape, does not keep the same volume

3 Gas •

- ice



keeps the same volume, does not keep the same shape

**G Write homogeneous or heterogeneous for each mixture shown**

