


GEOMETRICAL SHAPES

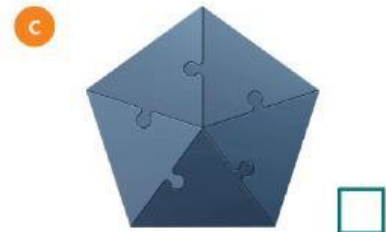
1 Look at the pictures. Write the shapes.

triangle hexagon pentagon



2 Circle the correct words. Then match.

- 1 A hexagon has six / five sides.
- 2 A pentagon has three / five sides.
- 3 A triangle has three / five angles.



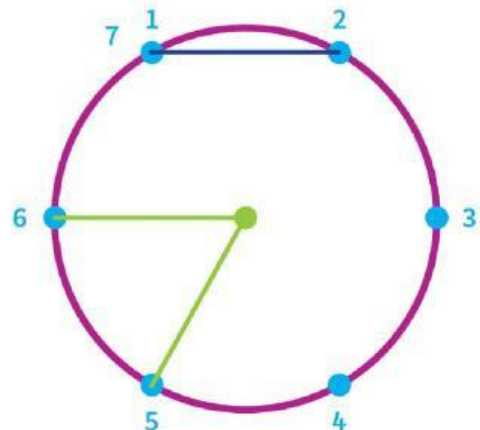
3 Join the blue dots in order with straight lines. Then answer the questions.

- 1 How many different shapes are there now?

- 2 What shapes are there?


- 3 How many sides are there? _____

- 4 How many angles are there? _____



4 Read about tangrams. Write the answers to the questions.

A tangram is a Chinese puzzle with different shapes in a square. You can move the shapes to make different pictures. These shapes make a picture. What things do these shapes make? How many different shapes are there?




1 What things do these shapes make?

Write the words.

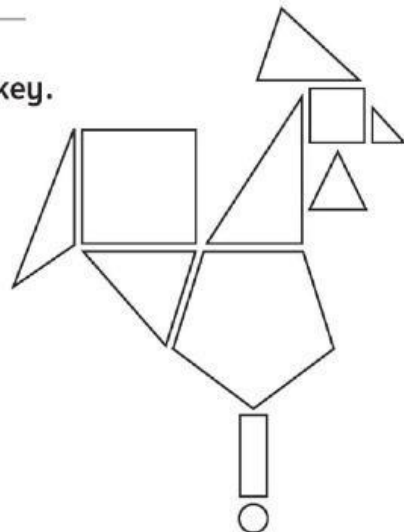

boat snake ~~cat~~ person


a cat b _____ c _____ d _____

2 How many different shapes are there? _____

5  Colour the tangram. Use the colours in the key. What animal do you see?

key



6  Make your own tangram. Draw and colour it. Then write about it.

This is a _____.

It's got _____ shapes: _____

There are _____ sides and _____ angles.

