



Campbell Academy Foundation, Inc.

Lower Calajo-an, Minglanilla Cebu

Weekly Test in K2 Numeracy

Lesson 12

Prepared by: Ms. Love

Name : _____

Listen to your teacher as she read the questions. Choose the letter of your answer.

1. Which symbol is used for addition?

A. -

B. +

C. =

2. What does the word “**take away**” mean?

A. Add

B. Subtract

C. Equal

3. If you count all the numbers of objects together, What are you doing?

A. Adding (+)

B. Taking away (-)

C. Making it smaller

4. What is a word problem?

A. A sentence that tells a number story and asks a question.

B. A list of numbers to be spelled.


C. A number of objects that need to count.

5. Joey was walking with 3 dogs in the park, Kean is also walking in the park with his 2 dogs. Who has 3 dogs?

A. Joey

B. Kean

C. Both of them



6. Abbie had a box of 9 crayons. There 5 crayons rolled away. How many crayons are left with Abbie?

A. 5 crayons

B. 6 crayons

C. 4 crayons

7. Dave and Mia were playing with their toys. Dave has 3 toys and Mia has 4 toys. How many toys do they have altogether?

A. 8 toys

B. 7 toys

C. 9 toys



8. Luke has a bag of 6 baseballs. He threw 4 of them. How many baseballs are left?



A. 2 baseballs

B. 3 baseballs

C. 10 baseballs

9. Ted had 5 candies. Her mom gave her 3 more candies. So Ted has 7 candies in all. Which is the correct number sentence in the problem?

A. $5+3=8$

B. $5+2=7$

C. $5-2=7$

10. Mina has 10 fruits in the basket. She gave 7 fruits to her classmates. How many fruits are left?



A. 8 fruits

B. 3 fruits

C. 2 fruits

Read each word problem below and write the number sentence in the box.

Sarah has 2 apples. Her friend gives her 3 more apples.
How many apples does Sarah have now?



+

=


Tim has 1 blue balloon and 4 red balloons.
How many balloons does Tim have in total?



+

=

There are 5 birds sitting on a fence. 2 more birds join them. How many birds are there now?



+

=


Emma sees 3 butterflies in the garden. Later, she sees 2 more butterflies. How many butterflies does Emma see in total?



+


=

Max has 4 shells. He gives 2 shells to his brother. How many shells does Max have now?




$$\square - \square = \square$$

Anna has 3 candies. She eats 1 candy. How many candies does Anna have left?



$$\square - \square = \square$$

Peter sees 6 squirrels in the park. 3 squirrels run away. How many squirrels are left?



$$\square - \square = \square$$

Daisy has 5 toy trains. She loses 2 toy trains. How many toy trains does Daisy have now?



$$\square - \square = \square$$



Bonus Points:



The fish tank has **9 blue fish** inside. The cat took away **8 fish**. How many fish are **left** in the tank? (Write the number sentence below)

$$\square \bigcirc \square \bigcirc \square$$