

Nama :

Kelas :

SUDUT BERPELURUS

Dua sudut dikatakan saling berpelurus apabila jumlahnya adalah 180 derajat.

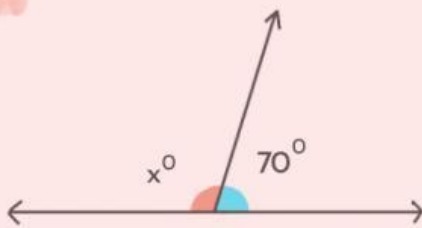


$$\angle BOA + \angle AOC = 180^\circ$$

LATIHAN

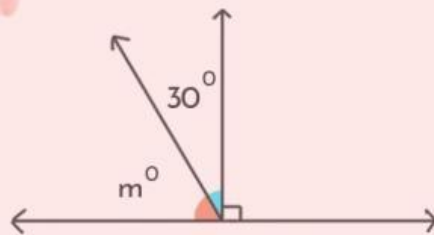
Carilah nilai sudut yang belum diketahui!

1



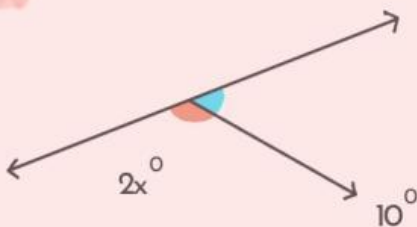
$$x = \underline{\hspace{2cm}}$$

2



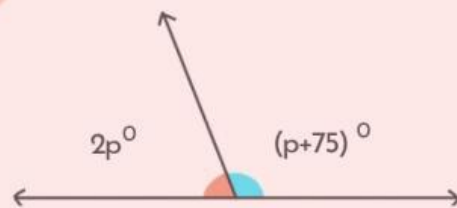
$$m = \underline{\hspace{2cm}}$$

3



$$x = \underline{\hspace{2cm}}$$

4



$$p = \underline{\hspace{2cm}}$$