

<b>Spelling</b>	<b>Arithmetic</b>	$46 \div 2 =$	$706 - 10 =$	$57 + 39 - 14 =$
stream scream bean mean clean				

### Grammar and punctuation

[www.themumeducates.com](http://www.themumeducates.com)

1. Underline all of the common nouns, and circle all of the proper nouns in each sentence.

- Henry plays games on his computer.
- Mr. Fan runs in the park every Sunday.
- Caroline lives in an apartment on Loxford Boulevard.
- Dr Flood is flying on a plane to Norway.
- Kinza's birthday is in April.
- Fluffy likes playing with ball in the Victoria Park.

2. Add commas where they belong in each sentence.

- The girl went to the mall and she bought lots of clothes.
- I like blue green and red colours
- My dog likes to run swim and play.
- Will you help me wash the dishes dust the furniture and vacuum the living room.

### Reasoning

1. An apple weighs 190g



An apple and pear weigh 400g.



How much does the pear weigh?

\_\_\_\_\_

How much do two apples weigh?

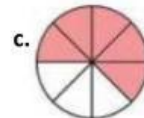
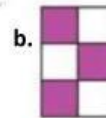
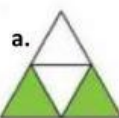
\_\_\_\_\_

2. There are 90 marbles in a bag.

Eight children each takes four marbles. How many marbles are left in the bag?

\_\_\_\_\_

3. Tick the shapes which show fractions equivalent to  $\frac{1}{2}$ .



Which shape doesn't have  $\frac{1}{2}$  shaded? Explain your answer.