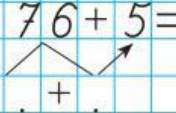
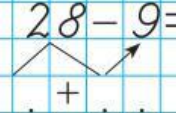
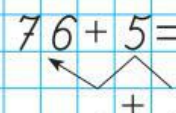
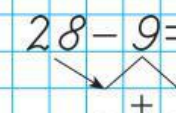
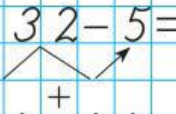
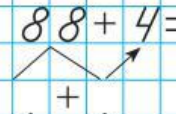
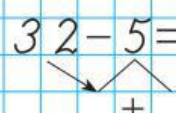
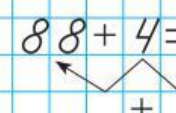
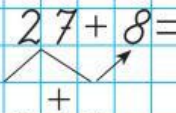
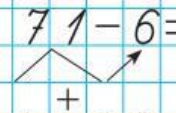


Розв'язуємо задачі

Знайди значення виразів двома способами.

$76 + 5 =$	$+$	$=$	$28 - 9 =$	$+$	$=$
					
$76 + 5 =$	$+$	$=$	$28 - 9 =$	$-$	$=$
					
$32 - 5 =$	$+$	$=$	$88 + 4 =$	$+$	$=$
					
$32 - 5 =$	$-$	$=$	$88 + 4 =$	$+$	$=$
					
$27 + 8 =$	$+$	$=$	$71 - 6 =$	$+$	$=$
					
$27 + 8 =$	$+$	$=$	$71 - 6 =$	$-$	$=$
