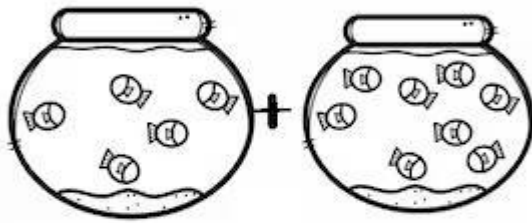


Name : _____

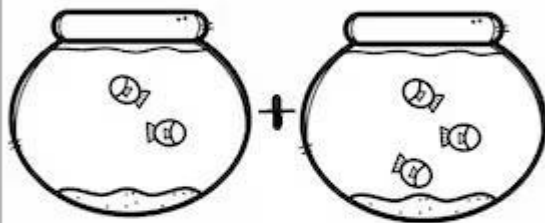
1

FISH BOWL ADDITION

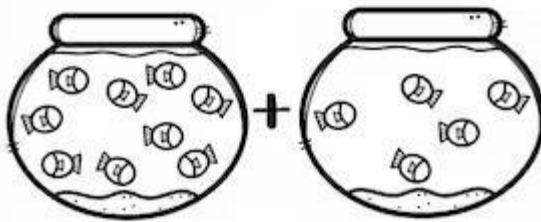
Use the pictures to add. Write the sum.



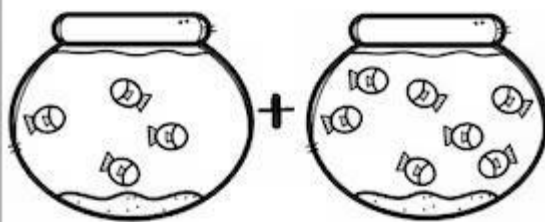
$$5 + 8 = \square$$



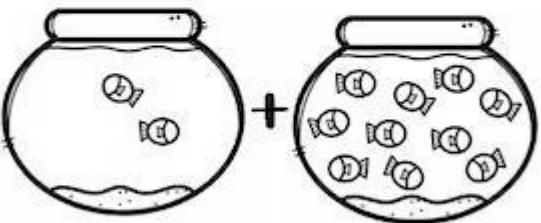
$$2 + 3 = \square$$



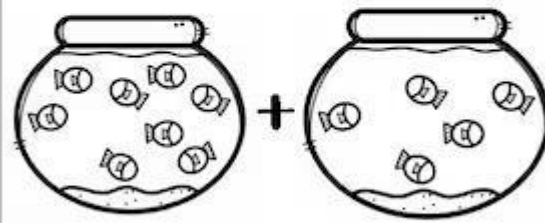
$$9 + 5 = \square$$



$$4 + 7 = \square$$



$$2 + 10 = \square$$



$$8 + 5 = \square$$