

student's name:

1 - Arrange the stages of development of the zygote by dragging the stage and placing it in the appropriate rectangle

1

2

3

morula

zygote

blastocyst

2-Which process restores the haploid number back to diploid?

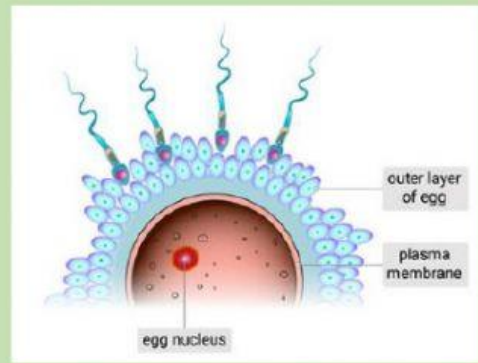
3 - When fertilization occurs, the egg cell (23 chromosomes) and the sperm cell (23 chromosomes) unite to form ?

4 - Which of the following is the correct route that sperm take through the female reproductive tract?

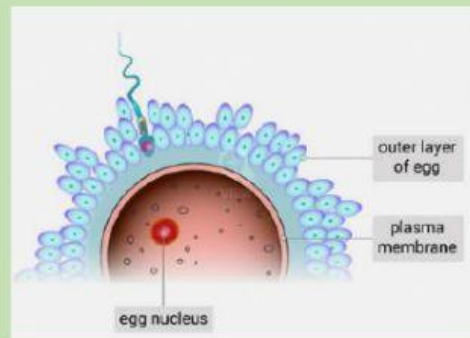
5 - Where does fertilization take place?

## 6 -Connect the drawing and the correct description

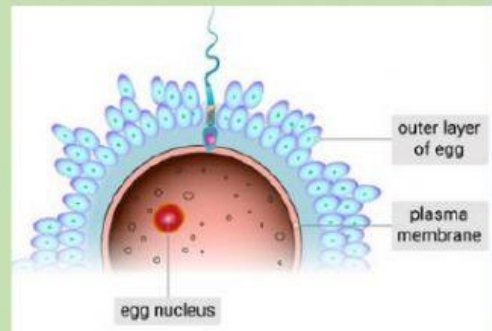
Fertilization  
occurs



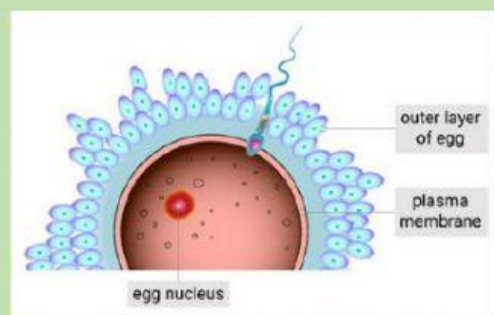
Head of sperm  
enters egg



Sperm swim  
around egg



Sperm is  
inside



Acrosome  
weakens egg  
membrane

