

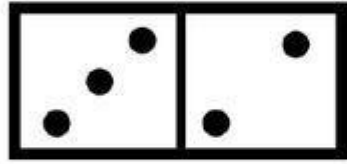




MATEMÁTICAS (SUMAS)






Nombre: _____ Curso: _____



$3+2=\square$

$6+2=\square$

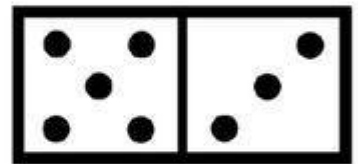
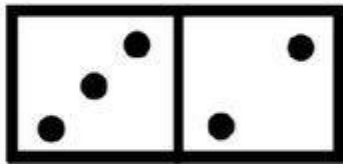
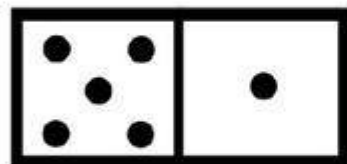
$5+3=\square$



$6+3=\square$

$1+6=\square$

$4+5=\square$



$5+1=\square$

$3+2=\square$

$5+3=\square$