

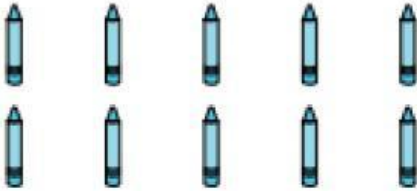






Name : \_\_\_\_\_

## One More or One Less

Sheet 1

Count the number of pictures, and write the number that is one more and the number that is one less.

1)	<b>1 Less</b>		<b>1 More</b>
2)	<b>1 Less</b>		<b>1 More</b>
3)	<b>1 Less</b>		<b>1 More</b>
4)	<b>1 Less</b>		<b>1 More</b>
5)	<b>1 Less</b>		<b>1 More</b>