



















Name: _____

Mathematics: Weight

Compare the weight for the students in Class 1-H.

Weight	Number of students
12 kg	  
15 kg	  
25 kg	 
18 kg	    
30 kg	  

 = 1 boy

 = 1 girl

1. How many students weigh **25 kg**? _____ students
2. Only three girls weigh _____ kg.
3. How many students weigh **12 kg**? _____
4. Most of the students weigh (**more, less**) than **10 kg**.
5. How many boys weigh **30 kg**? _____ boy
6. How many students are in the class? _____