

BOOST

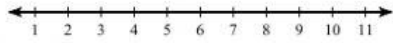
Name _____ ID: 1

Inequalities Review

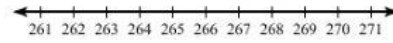
Date _____ Period _____

Solve each inequality and graph its solution.


1) $b - 2 \leq 1$



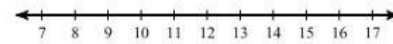
2) $14 < \frac{v}{19}$




3) $-16r < -48$



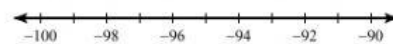
4) $2x \leq 22$



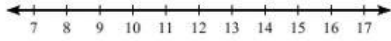
5) $-27 > r - 7$



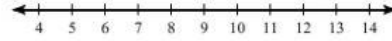
6) $\frac{v}{19} \geq -5$



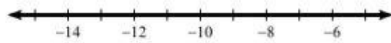
7) $5x + 5 > 50$



8) $-46 \leq 10 - 8x$



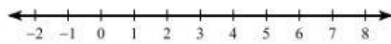
9) $-2 \geq \frac{n+1}{5}$



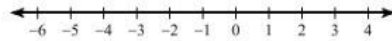
10) $8 + \frac{p}{4} \leq 9$



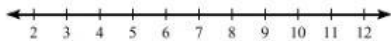
11) $\frac{a-9}{4} \leq -2$



12) $-4 + 9b > -31$



13) $5(3 - 6n) < -105$



14) $-3(-3x + 3) > -81$

