























# MOTHER DIVINE PUBLIC SCHOOL

G-31, Sector-3, Rohini, Delhi-110085 | 7835000386-87

Email: [info@motherdivineschool.com](mailto:info@motherdivineschool.com) | URL: [www.motherdivineschool.com](http://www.motherdivineschool.com)

NAME: \_\_\_\_\_ GRADE: I & SEC: \_\_\_\_\_ DATE: \_\_\_\_\_

Q. Study the following picture table and answer the following questions.

| Number of toys sold |   |   |   |   |   |
|---------------------|---|---|---|---|---|
| 6                   |   |   |   |    |   |
| 5                   |   |    |   |    |   |
| 4                   |   |    |    |    |   |
| 3                   |    |    |    |    |   |
| 2                   |   |   |   |   |   |
| 1                   |  |  |  |  |  |
|                     | Riya  | Mohan   | Ajay  | Nina  | Sonal   |

a) How many toys were sold by Ajay? \_\_\_\_\_

b) Who sold the least toys? \_\_\_\_\_

c) Who sold the most toys? \_\_\_\_\_

d) Total number of toys sold? \_\_\_\_\_