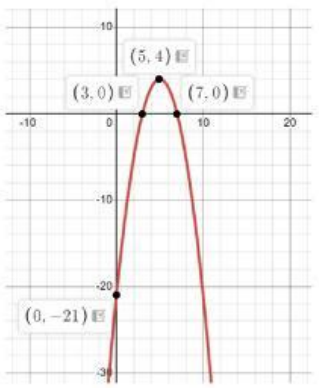
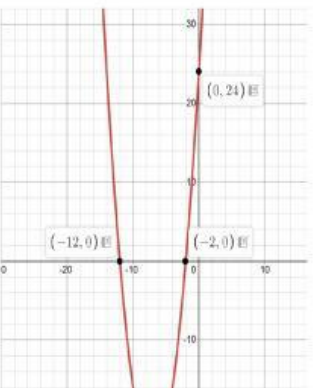
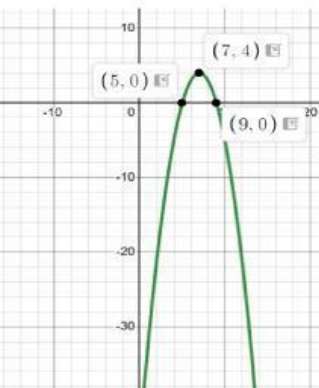


Drag and Drop the Following equations to their corresponding graphs & forms.

A) $y = -(x - 5)(x - 9)$	D) $y = -(x - 7)(x - 3)$	G) $y = -(x - 5)^2 + 4$
B) $y = (x + 7)^2 - 25$	E) $y = -(x - 7)^2 + 4$	H) $y = (x + 2)(x + 12)$
C) $y = x^2 + 14x + 24$	F) $y = -x^2 + 10x - 21$	I) $y = -x^2 + 14x - 45$

			
Vertex Form			
Factored Form			
Standard Form			