





Number of sweets sold in a candy shop

Answer the following questions:

Lollipop	Chocolate Bar	Cotton Candy	Gumballs
			

- 1) There are _____ types of sweets.
- 2) The most sweets sold is _____.
- 3) The total number of chocolate bar and gumballs is _____.
- 4) The total number of sweets sold in a candy shop is _____.
- 5) Which sweets is least sold in a candy shop? _____