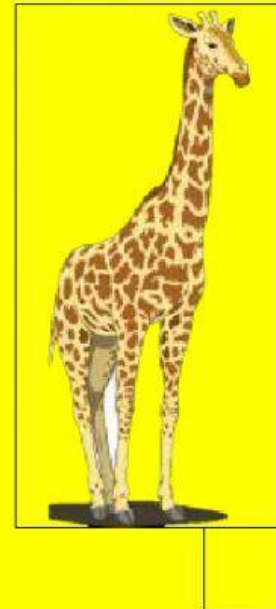




[1/2/3]Ordering objects

Grade .1

Q.1:-Order the animals from shortest to tallest [1/2/3/]



Q.2:- Order the animals from longest to shortest [1/2/3/]

