

What's the time?



It's half past ten.

It's eight o'clock.

It's five o'clock.

It's eleven o'clock.

It's half past three.



It's half past one.

It's half past six.

It's half past seven.

It's twelve o'clock.



It's nine o'clock.



WHAT TIME IS IT?



- a. A quarter past five
- b. A quarter to five
- c. Three past five
- d. Five o'clock



- a. A half past seven
- b. A half past six
- c. A half to six
- d. Six o'clock



- a. Half past eight
- b. Four past eight
- c. Eight past four
- d. Twenty past eight



- a. Four to ten
- b. Ten past four
- c. Four past ten
- d. Ten to four




- a. Five to twelve
- b. One past one
- c. One past twelve
- d. Five past twelve



- a. A quarter to twelve
- b. Nine to twelve
- c. Twelve past nine
- d. Twelve to nine



- a. Seven past twelve
- b. Twelve past seven
- c. Twelve o'clock
- d. Seven o'clock



- a. Eight past six
- b. Six past eight
- c. Six to eight
- d. A half past eight



- a. Ten o'clock
- b. O'clock ten
- c. Twelve o'clock
- d. Ten past twelve




- a. A quarter past three
- b. A quarter past ten
- c. Ten past quarter
- d. Ten past three




- a. Twelve past one
- b. Twelve o'clock
- c. One o'clock
- d. One past twelve



- a. A quarter past nine
- b. A quarter to seven
- c. Seven past quarter
- d. Seven past nine



- a. Twenty five to six
- b. Six to seven
- c. Twenty five past seven
- d. Seven past six



- a. Twenty five to twelve
- b. One past five
- c. Five past one
- d. Twenty five past twelve



- a. Two past twelve
- b. Two o'clock
- c. Twelve o'clock
- d. Twelve to two



- a. Twenty to twelve
- b. Twenty past twelve
- c. Eight to twelve
- d. Twelve to eight




- a. Twenty past seven
- b. Seven past four
- c. Four past seven
- d. Seven to four



- a. Five to five
- b. Five to four
- c. Five past five
- d. Five o'clock



- a. Three past two
- b. Two past three
- c. Two to three
- d. Ten past three



- a. A half past one
- b. A half past six
- c. Six past one
- d. One past six

Look at the clocks. What's the time? Tell your partner.
Write the letter.

What's the time?

It's two o'clock.



- 1 It's ten o'clock.
- 2 It's seven o'clock.
- 3 It's five o'clock.
- 4 It's three o'clock.

5 It's half past eleven.

6 It's half past four.

7 It's half past one.

8 It's half past six.



- 9 It's quarter past seven.
- 10 It's quarter past nine.
- 11 It's quarter past five.
- 12 It's quarter past twelve.

13 It's quarter to four.

14 It's quarter to eight.

15 It's quarter to eleven.

16 It's quarter to one.



What's the time? Speak and write.

.....

.....

.....

.....