

WORKSHEET

My name is: _____

Monday, November 20th, 2024

FFs2 - Unit 8

Teacher's
feedbacks

FF2. Unit 8. What's the time?

Telling the time: What time is it? = What's the time?

1) It's + hour + o'clock.

Ex: 6:00 → It's six o'clock.

2) It's + hour + minute.

Ex: 5:20 → It's five twenty.

3) It's + minute + past + hour.

Ex: 8:20 → It's twenty past eight.

4) It's + minute + to + hour.

Ex: 6:50 → It's ten to seven.

5) It's + half past + hour.

Ex: 6:30 → It's half past six.

6) It's + a quarter to/past + hour.

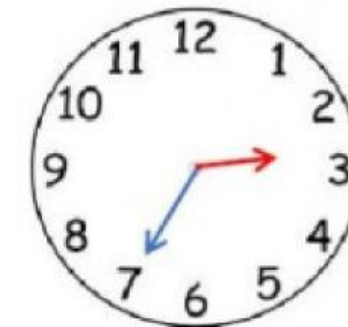
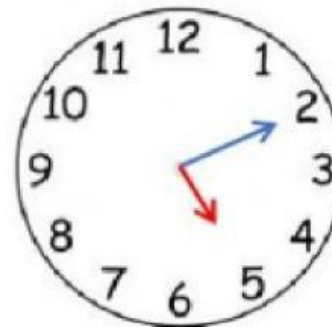
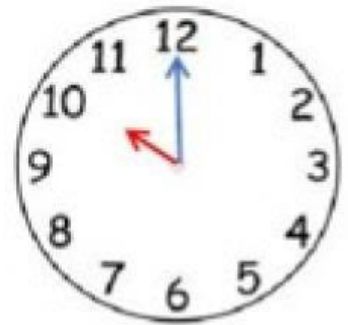
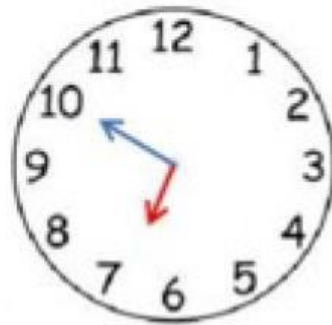
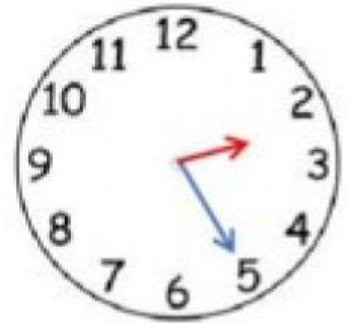
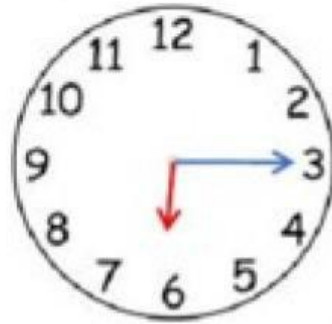
Ex: 9:15 → It's a quarter past nine.

8:45 → It's a quarter to nine.

Task 1. Look and choose the correct answer.








Task 2: Listen and draw lines. There is one example.

Fred

Jack

Clare

Zoe



Peter

Paul

Julia