

INSPIRED TOTS EARLY LEARNING CENTRE
1ST GRADE FIRST TERM EXAMINATION 2024/2025 SESSION

QUANTITATIVE

NAME: _____

Arrange the numbers in ascending order.

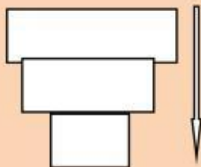
1. 11 5 2 7 3 4

2. 3 8 9 6 0 4

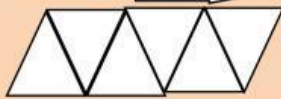
Arrange the numbers in descending order.

3. 2 9 2 7 6 1

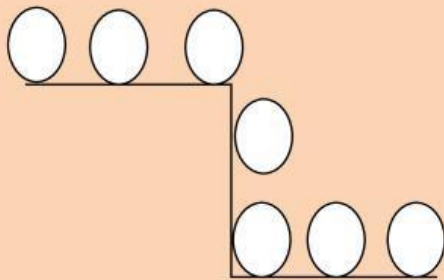
4. 17 3 9



5. 12 8 4 19 3 17



6. 90 40 20 50 70 80 100



7. 100 300 400 200 500 600

8. What is the first multiple of two (2)?

INSPIRED TOTS EARLY LEARNING CENTRE
1ST GRADE FIRST TERM EXAMINATION 2024/2025 SESSION

QUANTITATIVE

NAME: _____

a) 8 b) 6 c) 10 d) 2

9. What is the tenth multiple of two (2)?

a) 2 b) 20 c) 6 d) 8

10. What is the fourth multiple of two (2)?

a) 20 b) 5 c) 8 d) 10

Use your ten fingers to multiply.

11. $2 \times 6 =$ 14) $2 \times 8 =$ 15) $3 \times 2 =$

12. $2 \times 4 =$ 17) $2 \times 6 =$ 18) $3 \times 6 =$

13. Click on the even numbers.

66	1	7	34	19	25
----	---	---	----	----	----

Arrange the odd numbers in ascending order.

14. 59 67 65 55 57

