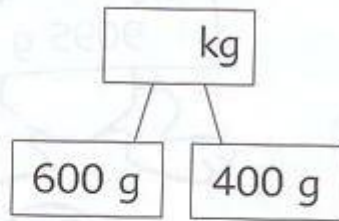
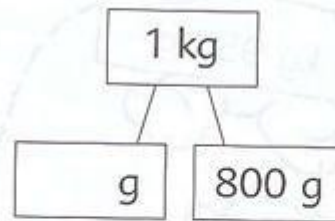


1. write the missing numbers.

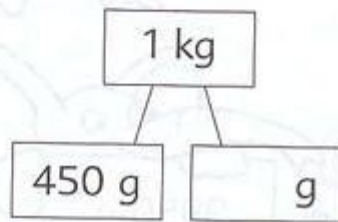
(a)



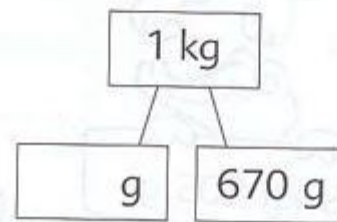
(b)



(c)



(d)



(e)  $1 \text{ kg} - 750 \text{ g} = \text{---} \text{ g}$

(f)  $1 \text{ kg} - 390 \text{ g} = \text{---} \text{ g}$

(g)  $1 \text{ kg} - 150 \text{ g} = \text{---} \text{ g}$

(h)  $1 \text{ kg} - 220 \text{ g} = \text{---} \text{ g}$

