

Nome: _____

Data: ___/___/___

Matemática

● Completa:

$3 + \underline{\quad} = 4$

$1 + \underline{\quad} = 3$

$5 + \underline{\quad} = 7$

$6 + \underline{\quad} = 12$



$3 + \underline{\quad} = 4$

$1 + \underline{\quad} = 3$

$5 + \underline{\quad} = 7$

$6 + \underline{\quad} = 12$

● Coloca os sinais.


Maior



Menor



Igual



$3 \bigcirc 4$

$1 \bigcirc 3$

$5 \bigcirc 7$

$6 \bigcirc 2$



$3 \bigcirc 4$

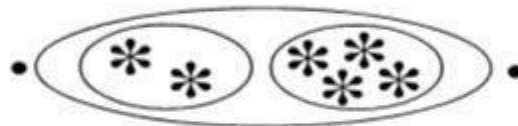
$1 \bigcirc 3$

$5 \bigcirc 7$

$6 \bigcirc 2$

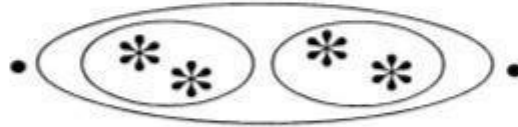
● Faz a correspondência.

$2 + 2$



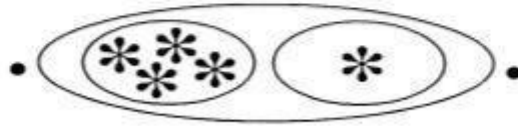
4

$2 + 4$




6

$3 + 5$



8

$4 + 1$



5