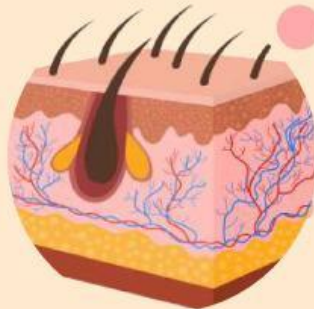
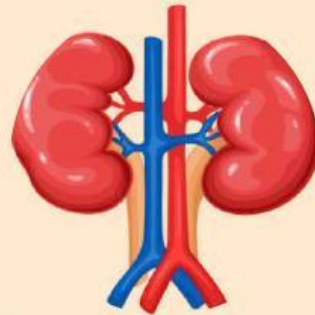
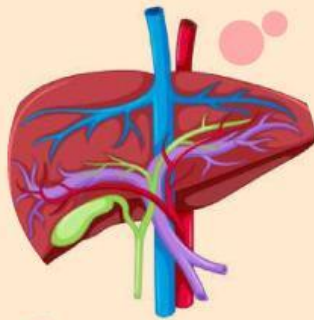


WORKSHEET

EXCRETORY SYSTEM



GROUP:

CLASS:



WORKSHEET

EXCRETORY SYSTEM

A. KIDNEY

Please watch the video below.



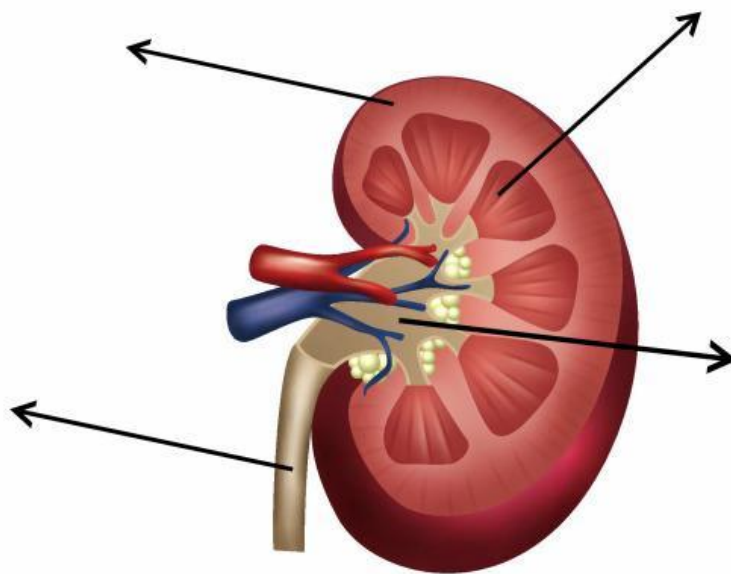
Based on the video, write down the solution that can solve the problem:

WORKSHEET

EXCRETORY SYSTEM

B. KIDNEY STRUCTURE

Open the module and match the name of structure with the label.



Ureter

Pelvic

cortex

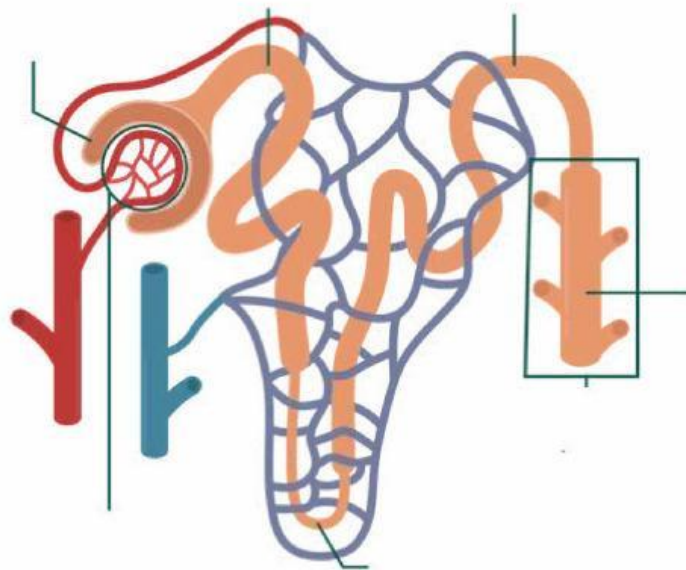
Medulla

WORKSHEET

EXCRETORY SYSTEM

C. NEPRHON STRUCTURE

The unit functional of the kidney is called _____.
Please complete the structure of the nephron below.



The Process of urine formation:

1. _____ is filtering blood into filtrate, occur in glomerulus and bowman capsule.
2. _____ is reabsorbing substance that is needed by body, like glucose, amino acid, water and ion, except urea. Occur in _____
3. _____ is moving non-essential substance from blood and excrete urine.

WORKSHEET

EXCRETORY SYSTEM

D. MAKE A POSTER

After you study about Kidney, and see the new about kidney failure, please make a poster about the preventive action to keep our kidney health.

You and your group can draw it or make it by digital apps.

Upload your poster in link below:

<https://s.id/KIDNEYPOSTER>

Submit your worksheet whit teacher code:

9omfh4rto87