












## NOTE VALUES / RHYTHMS 2

Knowing the length of notes is very important in music; after all, playing the correct rhythm is more important than the correct notes.

Look over this table to refresh your memory about note lengths.

	4 beats			1 beat	
	3 beats			$\frac{1}{2}$ beat each	
	2 beats			$\frac{1}{2}$ beat	

Using this information write the note values underneath each of the notes printed below, and then answer the sum. (Number 1 has been done for you as an example.)



1.  +   

4



+

3



=

7
2.  +   



+

=
3.  +   



+

=
4.  +   



+

=
5.  +   



+

=
6.  +   



+

=
7.  +   



+

=
8.  +   

+

=
9.  +   

+

=
10.  +   

+

=