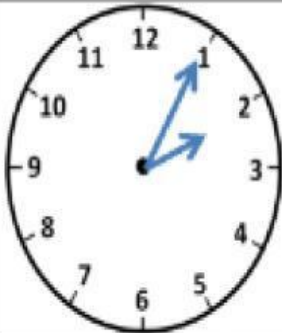
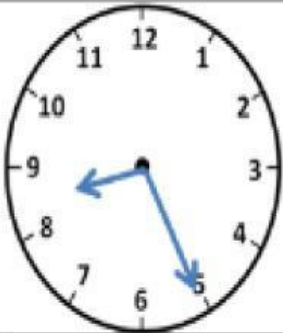
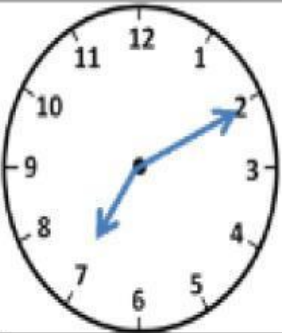
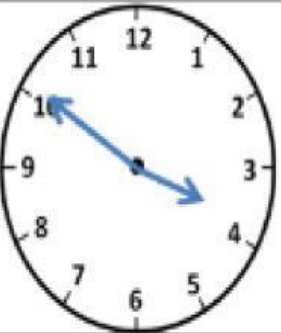


**Read the clues and write the correct answers in the gap.**

1. Today is Monday. Tomorrow will be . . . \_\_\_\_\_
2. There are seven days in one of these. \_\_\_\_\_
3. There are sixty of these in an hour. \_\_\_\_\_
4. Each year has twelve of these. \_\_\_\_\_
5. There are sixty of these in a minute. \_\_\_\_\_
6. This is the month after July. \_\_\_\_\_
7. Twelve o'clock at night. \_\_\_\_\_
8. This is a weekend day except Sunday. \_\_\_\_\_
9. There are 100 of them in a century. \_\_\_\_\_
10. It can tell you the day and date. \_\_\_\_\_
11. There are 24 of these in a day \_\_\_\_\_
12. This can tell you the time. \_\_\_\_\_
13. This is the shortest month of the year. \_\_\_\_\_
14. This is 12:00 but it's not midnight. \_\_\_\_\_
15. There are 365 of them in a year. \_\_\_\_\_
16. Winter starts in this month. \_\_\_\_\_

Write the correct analogue time underneath each clock. The first one has been done for you.

			
five past two			
