

Lembar Kerja Peserta Didik

MATEMATIKA

Materi : Keliling dan
Luas Bangun Datar



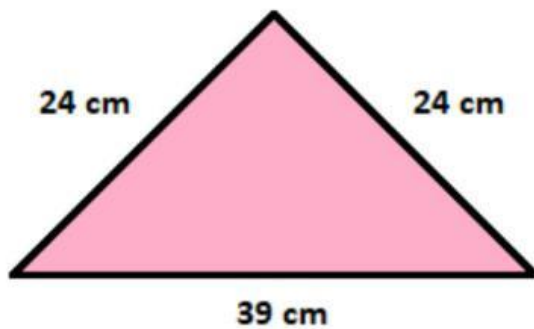
NAMA :

KELAS :

Ayo Berlatih, (1)

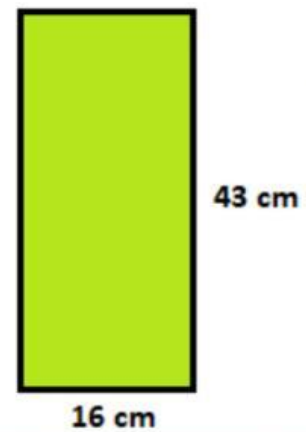
Hitunglah keliling bangun datar berikut!

1.



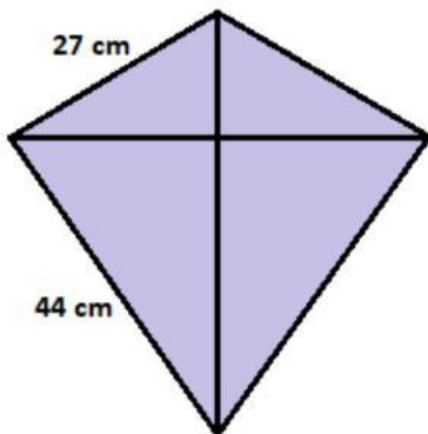
Keliling = cm

2.



Keliling = cm

3.



Keliling = cm

4.



Keliling = cm

5.

28 cm



Keliling = cm

6.

11 cm

25 cm

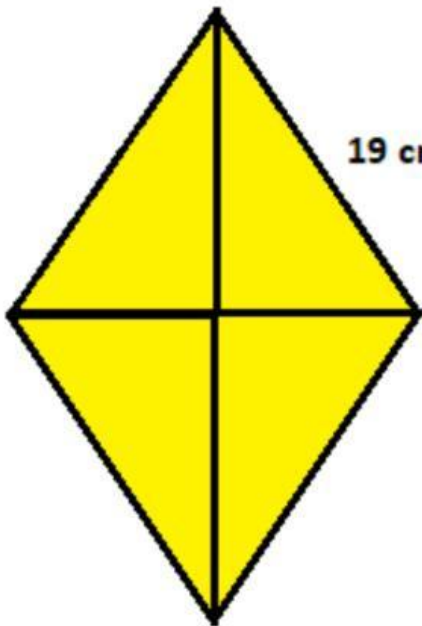
30 cm



Keliling = cm

7.

19 cm

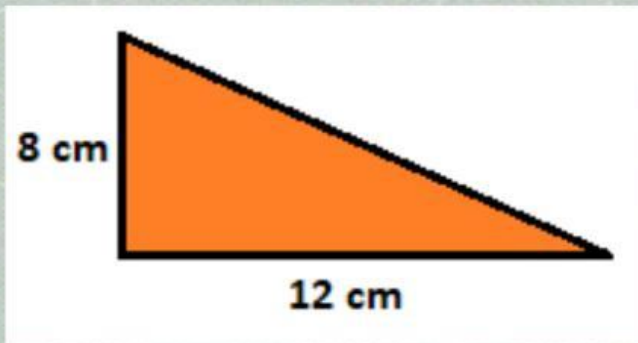


Keliling = cm

Ayo Berlatih, (2)

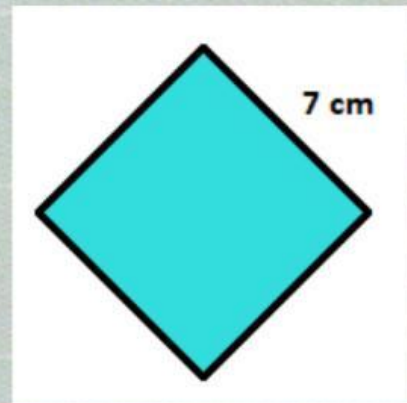
Hitunglah luas bangun datar berikut!

1.



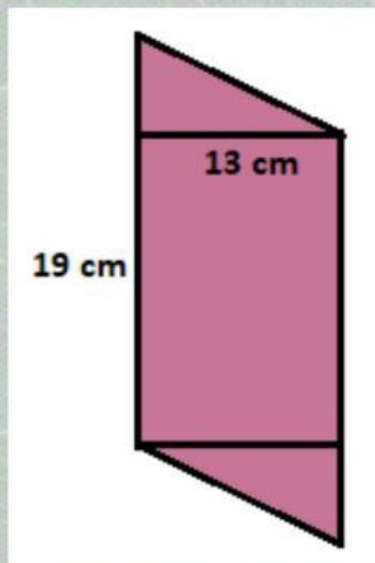
Luas = cm^2

2.



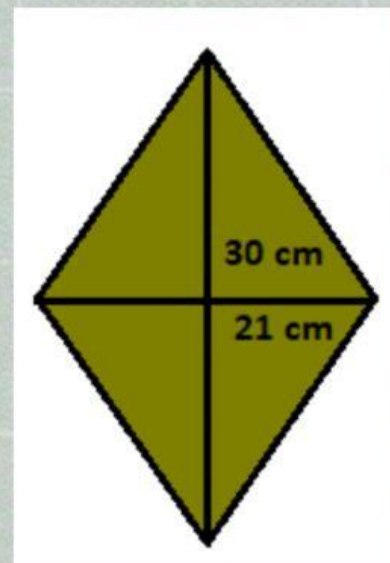
Luas = cm^2

3.



Luas = cm^2

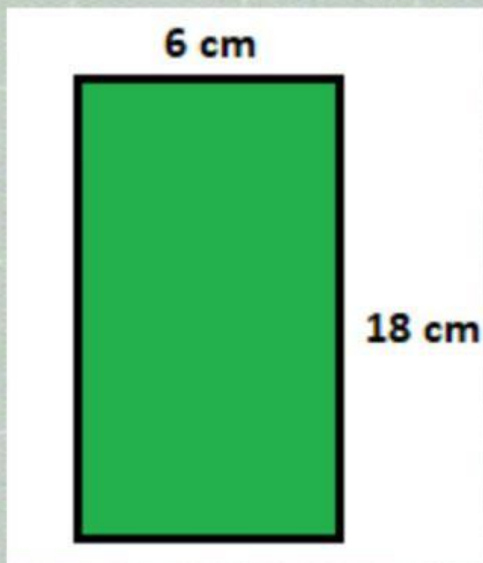
4.



Luas = cm^2

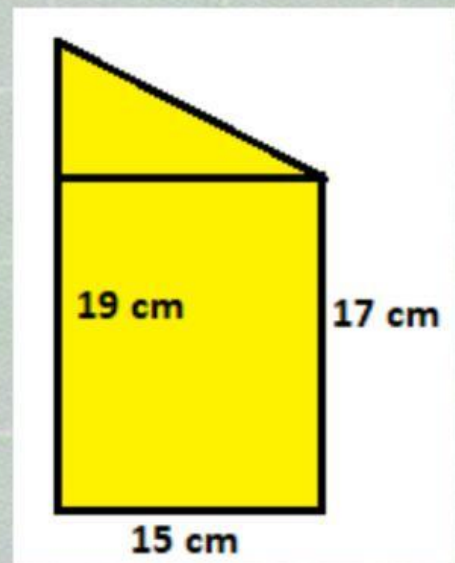
Hitunglah luas bangun datar berikut!

5.



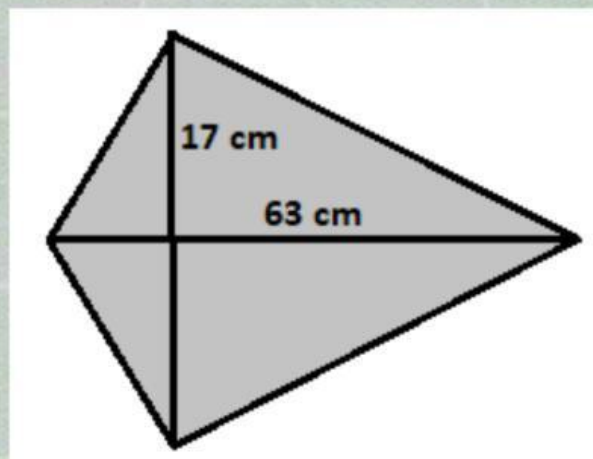
Luas = cm^2

6.



Luas = cm^2

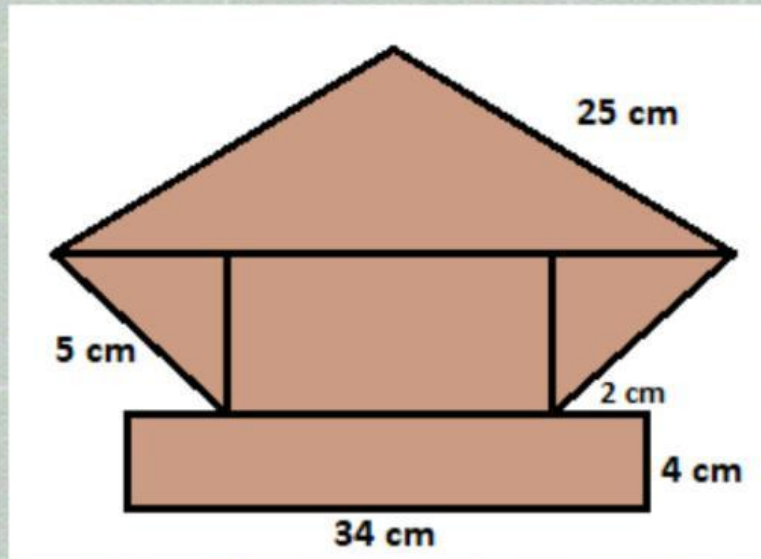
7.



Luas = cm^2

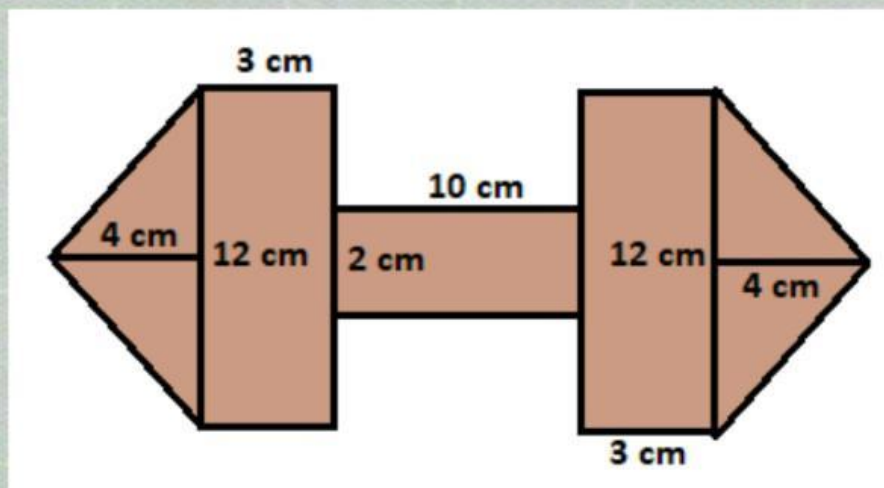
Ayo Berlatih, (3)

Hitunglah keliling bangun datar gabungan berikut!



Keliling = cm

Hitunglah luas bangun datar gabungan berikut!



Luas = cm²

Ayo Berlatih, (4)

1. 7500 are = hektare

2. 11 km² = are

3. 10 hm² = m²

4. 400 mm² = cm²

5. 5.000 dm² = ca

6. 16 hektare = ca

7. 920.000 dm² = are

8. 8.000 ca = are

9. 60 cm² = mm²

10. 17 km² = m²