


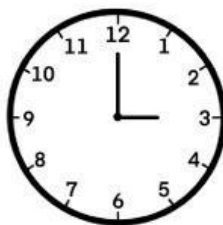








Name: \_\_\_\_\_

Date: \_\_\_\_\_

# The Time

Look at the clocks and choose the correct time

 <p>It's two o'clock</p> <p>It's twelve o'clock</p>	 <p>It's nine o'clock</p> <p>It's eight o'clock</p>
 <p>It's eleven o'clock</p> <p>It's ten o'clock</p>	 <p>It's three o'clock</p> <p>It's seven o'clock</p>
 <p>It's five o'clock</p> <p>It's four o'clock</p>	 <p>It's nine o'clock</p> <p>It's eight o'clock</p>
 <p>It's seven o'clock</p> <p>It's six o'clock</p>	 <p>It's five o'clock</p> <p>It's six o'clock</p>
 <p>It's one o'clock</p> <p>It's four o'clock</p>	 <p>It's five o'clock</p> <p>It's nine o'clock</p>

# What time is it?

Listen and choose the correct answer.

1. What time is it?

06:00

08:00

01:00

03:00

2. What time is it?

06:30

06:15

03:30

10:45

3. What time is it?

04:15

04:30

03:15

06:30

4. What time is it?

05:45

03:15

06:15

04:45

5. What time is it?

03:00

01:00

08:00

07:00

6. What time is it?

03:30

10:15

11:30

10:30

# Telling the time

What time is it?

